

Worksheet A


Subtract by Counting Back

Level 1 Level 2 Level 3

If you are not sure,
can refer to Student
Book pages 109 to 1

- I Count back.
Fill in the blanks.


a



4, 5, 6

There are 4 ducks left in the pond.

b

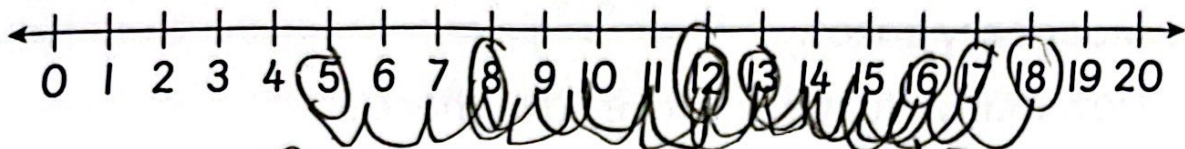


8, 9, 10

There are 8 chickens left in the cage.

2 Subtract.

Use the number line to help you.



a $16 - 8 = 8$

b $17 - 4 = 13$

c $18 - 6 = 12$

d $12 - 7 = 5$

Level 1

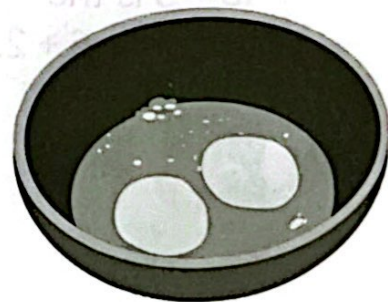

Level 2

Level 3

3 Daniel has 12 eggs.

He uses 2 eggs to make some cupcakes.

How many eggs are left?




$\boxed{10}, \boxed{11}, 12$

10 eggs are left.

4 There are 16 cakes.

8 of them are strawberry cakes and the rest are blueberry cakes.

How many blueberry cakes are there?



There are 8 blueberry cakes.

Level 1 Level 2 **Level 3**

5



$13 - 5$ is the same as $6 + 2$.

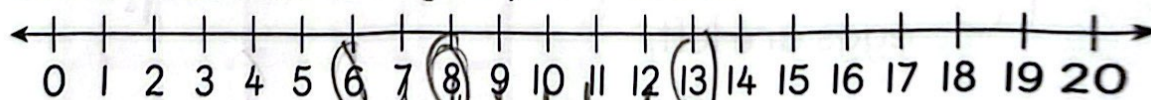
Eddy



$13 - 5$ is not the same as $6 + 2$. Caz

Who do you agree with? Eddy

Use a number line to give your reason.



$$13 - 5 = 8$$

$$6 + 2 = 8$$