

**What Am I?**

I am a 2D shape.

I have four sides.

I have four equal corners.

All four sides are the same length.


**What Am I?**

I am a 3D shape.

I have five flat faces.

I have five vertices.

Four of my faces are triangles and one is a square.


**What Am I?**

I am a 3D shape.

I have six faces.

I have twelve edges.

I have eight vertices.


**What Am I?**

I am a 3D shape.

I have four faces.

All of my faces are triangles.

I have four vertices.

**What Am I?**

I am a 2D shape.

I have three sides.

I have three vertices.

