

Look Back

P.96

Ron has some kites.



How do you find the number of kites Ron has?

We can count the number of kites.

How many kites does he have? *There are six kites.*

Thinking Cap



Ron receives 5 more kites.
How many kites does he have now?
Count on and show your partner.




11 kites



Let's Learn

P.97

- a 6 rabbits are eating and 2 rabbits are sleeping.
How many rabbits are there altogether?



Count on from 6 to add.

6, 7, 8

There are 8 rabbits altogether.

What do you notice when you count on?

When we count on, the number gets larger.



- b There are 3 lemons and 6 pears.
How many fruit are there altogether?

P.97



You can use a number line to count on.

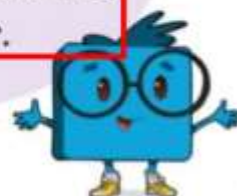


Count on from 6.



There are 9 fruit altogether.

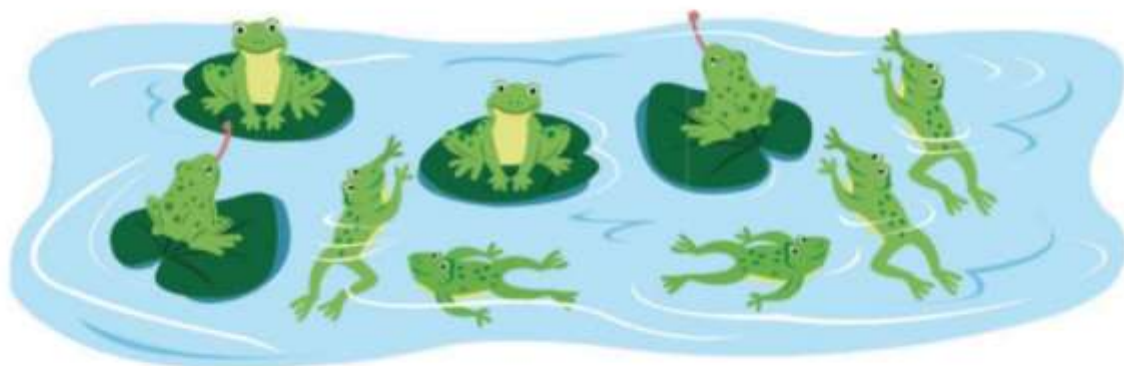
Count on from 3 is the same as count on from 6! It is quicker to count on from the larger number.



Let's Practise

P.98

- 1 5 frogs are in the water.
4 frogs are on the leaves.
How many frogs are there altogether?



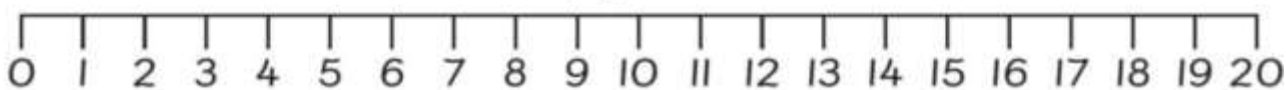
5, 6, 7, 8, 9

There are 9 frogs altogether.

98

P.99

- 2 Add.
Use a number line to help you.



a $11 + 4 =$ 15

b $17 + 3 =$ 20

