

Addition within 20

Worksheet A

Activity Book P.58

Add by Counting On

Level 1 Level 2 Level 3

- I Count on.
Fill in the blanks.

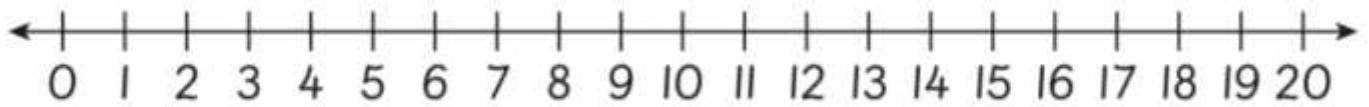
If you are not sure, you
can refer to Student's
Book pages 96 to 99.



4, 5, 6, 7, 8

2 Add.

Use the number line to help you.



a $8 + 3 = \underline{11}$

b $7 + 6 = \underline{13}$

c $13 + 4 = \underline{17}$


d $17 + 2 = \underline{19}$

Level 1 **Level 2** Level 3

3 There are 5 children in a queue.

3 more children join in.

How many children are in the queue altogether?

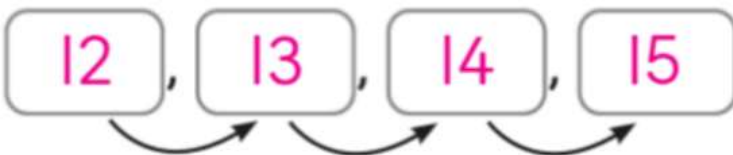


There are 8 children in the queue altogether.

4 Ron has 12 plums.

He buys 3 more plums.

How many plums does he have altogether?



He has 15 plums altogether.

Level 1 Level 2 Level 3

5 Look at the number line.

- a Think of two numbers from 11 to 20 that can be put in the boxes.



Answers vary.

For example:

11, 15; 12, 16; 13, 17; 14, 18; 15, 19; 16, 20

- b Write an addition sentence that shows the number line above.

Answers vary.

For example: $11 + 4 = 15$; $12 + 4 = 16$; $13 + 4 = 17$;

$14 + 4 = 18$; $15 + 4 = 19$; $16 + 4 = 20$