


Look Back



2 people

Eddy and Caz share the sweets equally. ÷

How many sweets does each of them get? **7**

Write a division sentence.

$$14 \div 2 = 7$$

Help your friends when they need.



P.127

how many sweets are there? **14**

how many people are sharing them?

2

Thinking Cap



18 sweets are shared equally among a group of children.

Each child gets 2 sweets. ^{2 in each group}

How many children are there? **9**

Use unit cubes to show your answer.



P.127



$$18 \div 2 = 9$$

Let's Learn

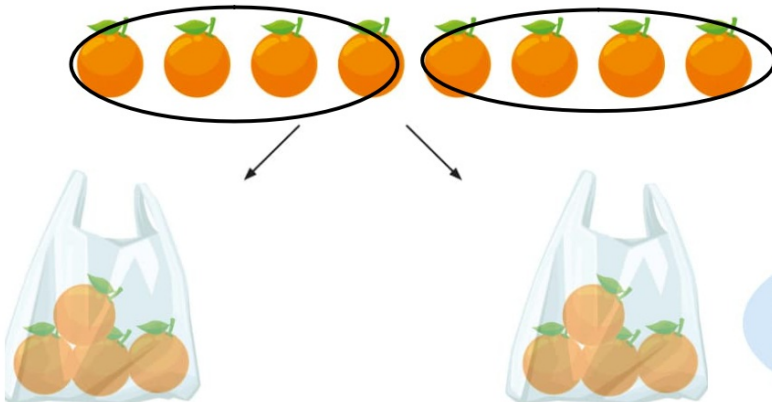
Bella has 8 oranges.

She puts the oranges into bags of 4.

How many **equal bags** will there be?

each bag will have 4 → we circle every 4 oranges together

P.128



Put 4 oranges into a group.
Do this until all the oranges
are put into groups.



$$8 \div 4 = 2$$

P.128

To find the number of bags, you divide 8 by 4.

$$\begin{array}{ccccccc} 8 & \div & 4 & = & 2 \\ \text{total number} & & \text{number} & & & & \\ \text{of oranges} & & \text{of oranges} & & \text{number of bags} & & \\ & & \text{in each bag} & & & & \end{array}$$

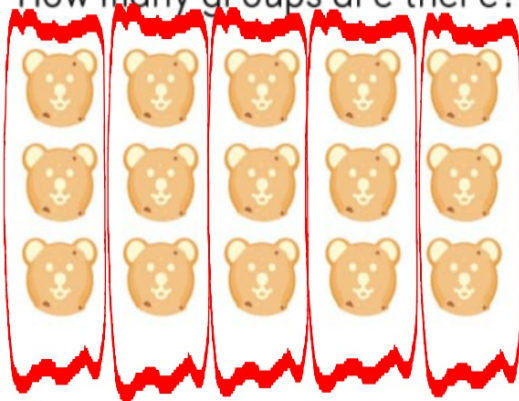
There are 2 equal bags.

P.129

Let's Practise

I Circle to make equal groups of 3.

How many groups are there?



$$15 \div 3 = \underline{5}$$

- 2 Lily packs 20 marbles in some bags.
Each bag has 4 marbles.



How many bags does Lily use? 5





3

I have more than 6 friends. I give 2 cards to each friend.

Izzy has fewer than 15 cards.


How many cards does Izzy have? **14**

How many friends does she have? **7**

Show your partner how you know.




7 friends (more than 6)



14 cards (fewer than 15 cards)

Naser shared some bananas equally among the shown monkeys in the picture .



- Complete the drawing.
- Write the division sentence he used to find out how many bananas each monkey got.


$$\underline{12} \div \underline{4} = \underline{3}$$

Lena wants to share the apples into her 7 children ,
Write the division sentence to find how many apples does each child get ?



$$\underline{14} \div \underline{7} = \underline{2}$$

Rana wants to share the carrots into her children , each one of them will get 3
Write the division sentence to find how many children does she have ?



$$\underline{15} \div \underline{3} = \underline{5}$$