

Divide as Sharing Equally (I.O.A.I)

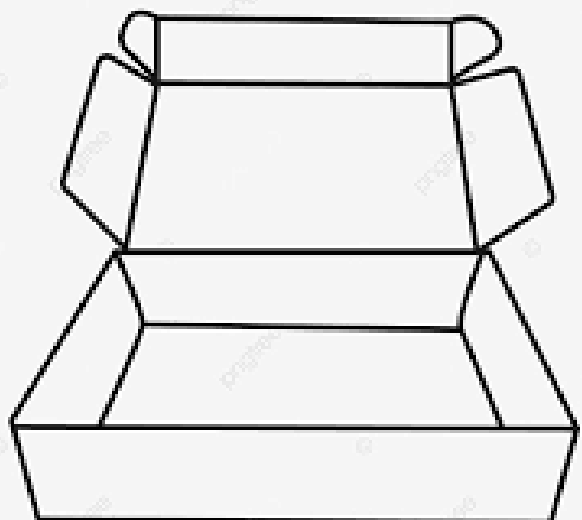
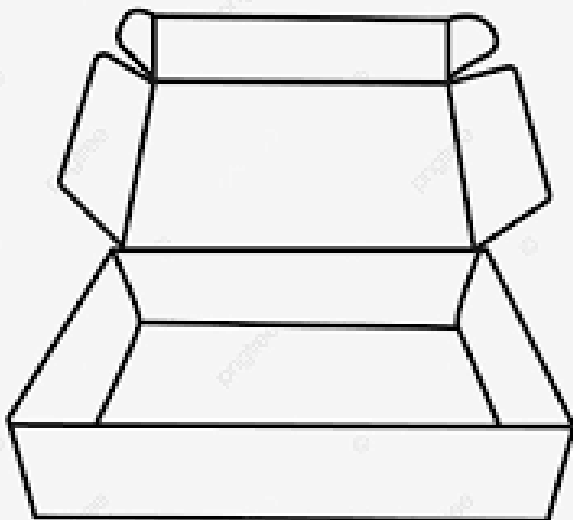
Date: _____

Q.I) Put 18 balls into 2 packets **equally**.




$$\square \div \square = \square$$

Each packet has _____ balls.


Draw to show your answer.



Q.2) Jana wants to **divide** the bananas **equally** into 3 bowls.
Write the division sentence.



Q.3) The kids in the picture **share** the cherries **equally**.
How many cherries does each kid get?
Write the division sentence.



Mixed Review: $4 \times 5 = \underline{\quad}$

$3 \times 10 = \underline{\quad}$

$2 \bigcirc 6 = 12$

$12 \bigcirc 6 \times 2$

$\underline{\quad} \times 5 = 25$

$5 \times 3 = \underline{\quad}$

$9 \bigcirc 2 = 18$

$6 \bigcirc 3 \bigcirc 2$

$10 \times 6 = \underline{\quad}$

$2 \times 8 = \underline{\quad}$

$4 \times 2 \bigcirc 8$

$7 \bigcirc 2 \bigcirc 14$