


Relate Multiplication and Division (I.O.D.)


Date: _____

Q.I) Fill in the blanks.




$$2 \times 8 = \underline{\hspace{2cm}}$$

$$\underline{\hspace{2cm}} \div 2 = 8$$



$$6 \times 5 = \underline{\hspace{2cm}}$$

$$\underline{\hspace{2cm}} \div 5 = 6$$



$$\underline{\hspace{2cm}} \times 10 = \underline{\hspace{2cm}}$$

$$\underline{\hspace{2cm}} \div 10 = 4$$

Q.2) Find the unknowns to complete each fact family.

(a) $2 \times 8 = \underline{\hspace{2cm}}$

$\underline{\hspace{2cm}} \times 2 = 16$

$16 \div \underline{\hspace{2cm}} = 8$

$\underline{\hspace{2cm}} \div 8 = 2$


(b) $35 \div \underline{\hspace{2cm}} = 5$

$\underline{\hspace{2cm}} \div 5 = 7$

$5 \times \underline{\hspace{2cm}} = 35$


$7 \times 5 = \underline{\hspace{2cm}}$

Q.3) Look at the picture and complete the fact family.



$4 \times \underline{\hspace{2cm}} = \underline{\hspace{2cm}}$

$3 \times \underline{\hspace{2cm}} = \underline{\hspace{2cm}}$



$\underline{\hspace{2cm}} \div \underline{\hspace{2cm}} = \underline{\hspace{2cm}}$

$\underline{\hspace{2cm}} \div \underline{\hspace{2cm}} = \underline{\hspace{2cm}}$



Mixed Review: Complete the following number sentences.

$2 \times 5 = \underline{\hspace{2cm}}$

$8 \times \underline{\hspace{2cm}} = 80$

$20 \div \underline{\hspace{2cm}} = 2$

$\underline{\hspace{2cm}} \div 5 = 5$

$5 \times \underline{\hspace{2cm}} = 50$

$40 \div 5 = \underline{\hspace{2cm}}$

$10 \bigcirc 3 = 30$

$16 \bigcirc 2 = 8$

$45 \bigcirc 5 = 9$