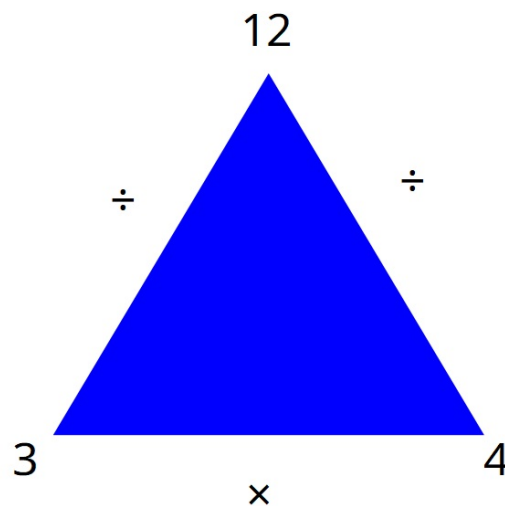


Form a fact family using the following numbers:

12 5 3 25 4 16

The first one has been done for you.



Write 4 multiplication and division sentences.

$$3 \times 4 = 12$$

$$12 \div 4 = 3$$

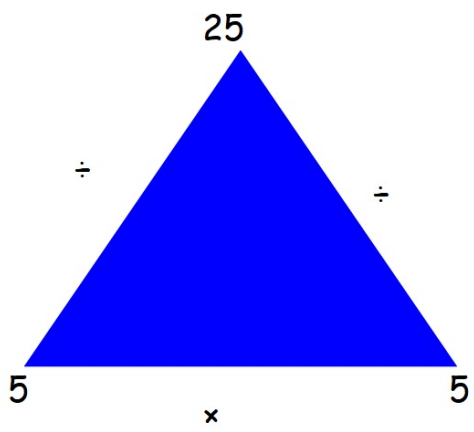
$$4 \times 3 = 12$$

$$12 \div 3 = 4$$

check your  
answer

$$4 \times 3 = 12$$

$$3 \times 4 = 12$$



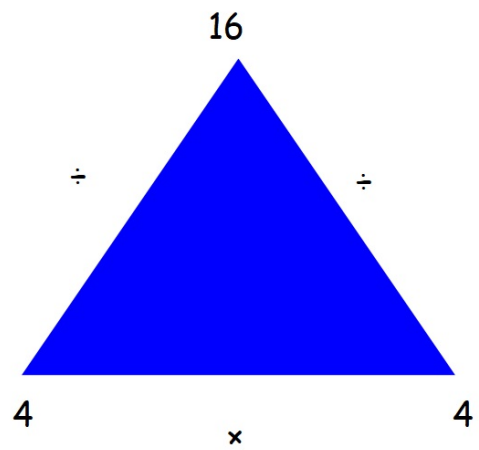
$$5 \times 5 = 25$$

$$25 \div 5 = 5$$

dividend

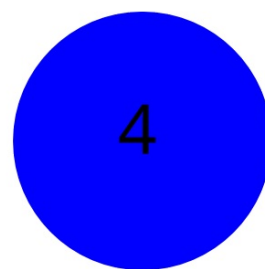


divisor

quotient



$$4 \times 4 = 16$$

$$16 \div 4 = 4$$



Find the product of the 2 smallest numbers.

$$5 \times 4 = 20$$

Write a division sentence with the smallest quotient.

$$20 \div 5 = 4$$

Check your answer.  $5 \times 4 = 20$