

Look Back

Eddy is walking down a flight of stairs.
He counts back as he walks down.



However, he missed a step as shown.
What step number did he miss? 5

Thinking Cap



Eddy starts walking down from step number 7.
He goes down 4 steps.
What step number does he land on? 3
Share with your partner how you know.



Let's Learn

- a There are 7 rabbits. 3 of them hop away.
How many rabbits are left?

P.110



Count back from 7.

4, 5, 6, 7

4 rabbits are left.

I can count back to subtract. When you count back, the numbers get smaller.



- b Subtract 2 from 15.

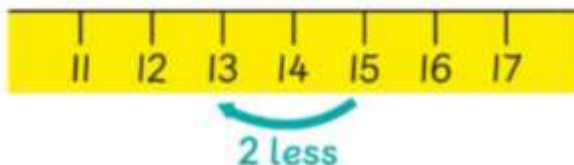
P.110



13, 14, 15

$$15 - 2 = 13$$

You can use a number line to count back.



- is called minus. It means subtract. $15 - 2 = 13$ is a subtraction sentence.



What is 2 more than 13?

15



Let's Practise

P.111

- 1 There are 9 frogs on the leaf.
4 of them jump off.
How many frogs are left?

5, 6, 7, 8, 9

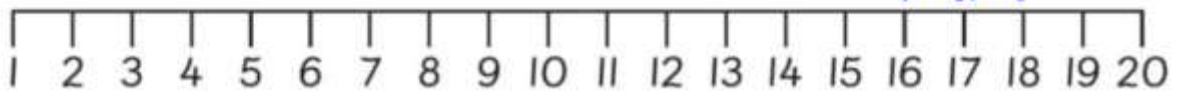
5 frogs are left.



- 2 Subtract.

P.111

Use a number line to help you.



a $18 - 2 = \underline{16}$

b $17 - 3 = \underline{14}$





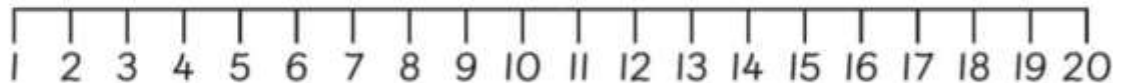
3 Caz says $9 + 3$ is the same as $14 - 3$.

Ron says $9 + 2$ is the same as $13 - 2$.

Who do you agree with? **I agree with Ron.**

Tell your classmate why you think so.

Use a number line.



**Caz is incorrect because $9 + 3 = 12$ and $14 - 3 = 11$.
12 and 11 are not the same.**

Ron is correct because $9 + 2 = 11$ and $13 - 2 = 11$.

Both equals to 11 hence $9 + 2 = 13 - 2$.