

CHAPTER

9

Subtraction within 20

Worksheet A

Subtract by Counting Back

Level 1

Level 2

Level 3

If you are not sure, you can refer to Student's Book pages 109 to 111.

I Count back.

Fill in the blanks.

a



4, 5, 6

There are 4 ducks left in the pond.

b

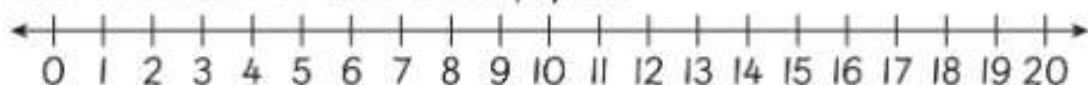


8, 9, 10

There are 8 chickens left in the cage.

2 Subtract.

Use the number line to help you.



a $16 - 8 = \underline{8}$

b $17 - 4 = \underline{13}$

c $18 - 6 = \underline{12}$

d $12 - 7 = \underline{5}$



3 Daniel has 12 eggs.

He uses 2 eggs to make some cupcakes.

How many eggs are left?



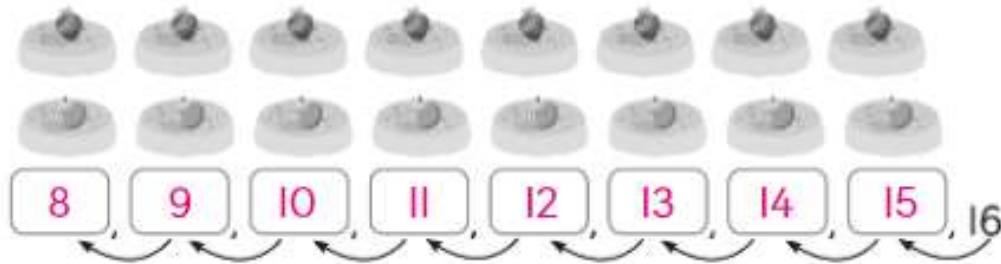
10 eggs are left.

Activity Book p.70

4 There are 16 cakes.

8 of them are strawberry cakes and the rest are blueberry cakes.


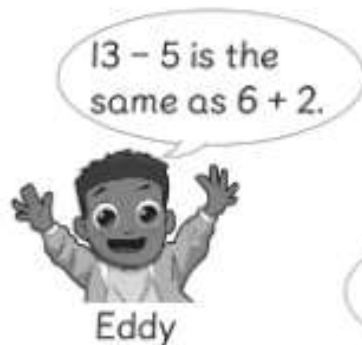
How many blueberry cakes are there?



There are 8 blueberry cakes.

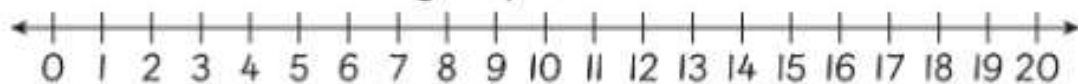
Level 1 Level 2 Level 3

5



Who do you agree with?

Use a number line to give your reason.



I agree with Eddy because $13 - 5 = 8$ and $6 + 2 = 8$. Since both equals to 8, Eddy is correct to say that $13 - 5$ is the same as $6 + 2$.