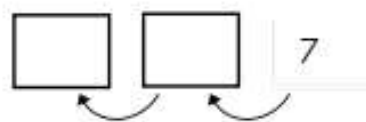


Subtract by Counting Back (Q.A.1)

Date: _____

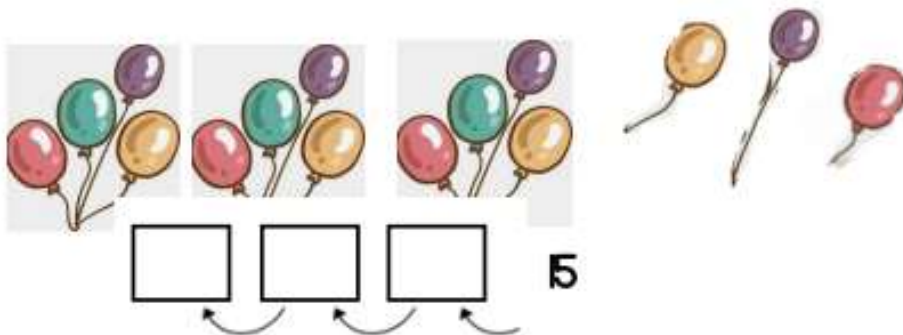
1 Count back. Write the missing numbers.

(a)



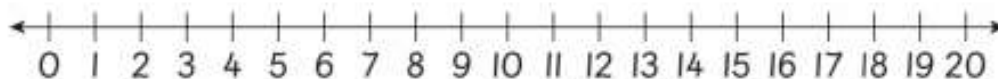
There are _____ biscuits left.

(b)



There are _____ balloons left.

2 Subtract. Use the number line to help you.



a) $11 - 4 =$ _____

b) $20 - 2 =$ _____

c) $13 - 3 =$ _____

d) $17 - 6 =$ _____

3.



Alexis has 15 colouring pencils. 3 colouring pencils break.
How many colouring pencils are left with Alexis?

Subtraction sentence: _____

_____ colouring pencils are left.

4.

Tina buys a bag of blue and green beads. The bag has 20 beads.
Tina counts 9 green beads. How many blue beads are in the bag?

Number sentence: _____

There are _____ blue beads in the bag.

5. Tick ✓ the correct box.

sentence	true	false
$7 + 2$ is the same as $15 - 6$		
$13 - 2$ is the same as $16 - 4$		

