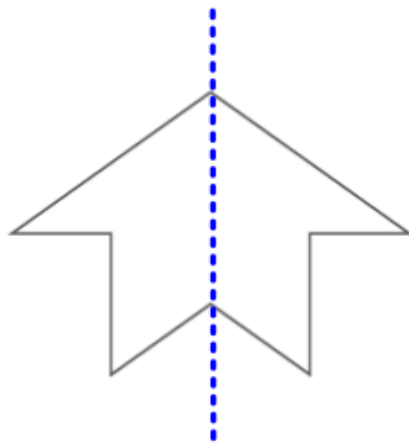


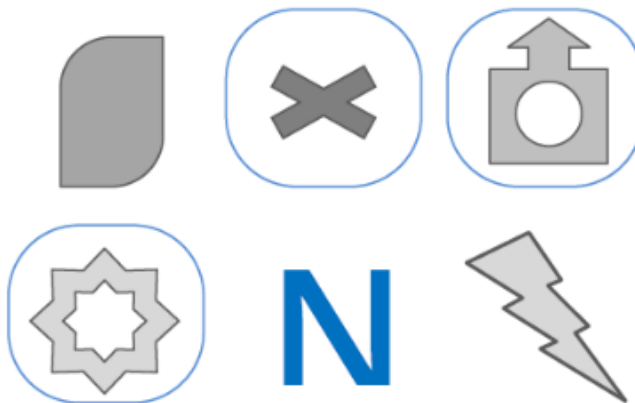
Lesson C: Find a Line of Symmetry (7.C.1)

Date: Key answers

1. Draw a line of symmetry for the shape below.



2. Bernard draws these shapes.




He circles some shapes.

Why do you think he circles these shapes?

The shapes he circles are symmetrical shapes

3. Are the shapes below symmetrical? Write "Yes" or "No" in the boxes.



yes



yes



no



no

4. Draw a ring around the symmetrical shapes.

