

Date: _____

1. How many apples are left in each group when you take 1 away?
Draw the correct amount and write the number on the line.


	take away		makes		<u>3</u>
	take away		makes		<u>7</u>
	take away		makes		<u>5</u>
	take away		makes		<u>9</u>
	take away		makes		<u>0</u>

Active
Go to S

p.11

2. Write the missing numbers.


(a)



$$8 - 3 = \underline{5}$$



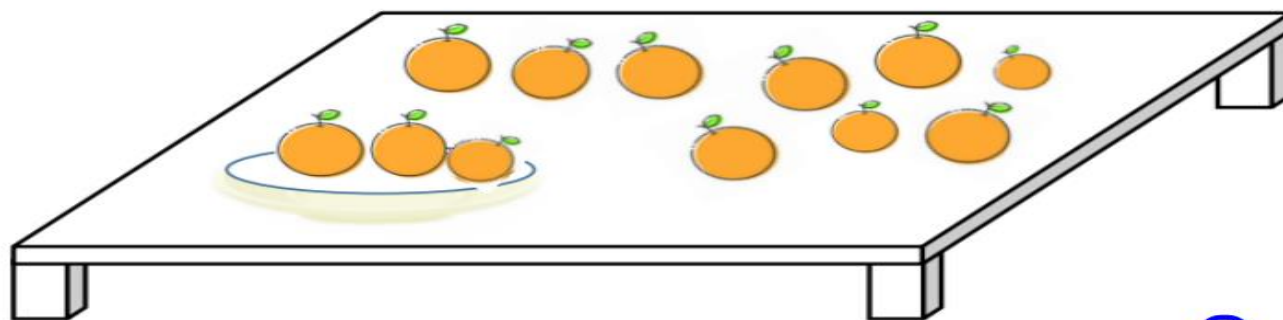
$$13 - 4 = 9$$



$$16 - 5 = 11$$

Activ

3. There are 12 oranges on the table.
David puts 3 oranges on a plate.
How many oranges are left on the table?



$$12 - 3 = 9$$

9 oranges