



Rosary School / Marj El-Hamam
Maths Worksheet (3.B.2)

Name: _____

Grade 2 ()

Date : _____

Find $\frac{1}{4}$ of a Set

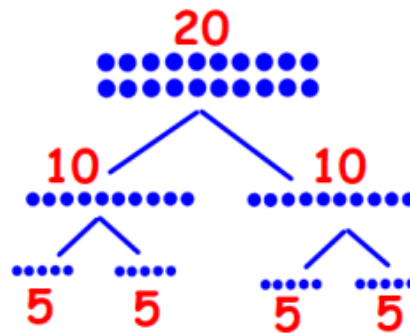
Q.1) Circle the correct answer.

A. Half of 20 is 10, so ____ of 20 is 5.

a. $\frac{1}{4}$

b. $\frac{1}{2}$

c. $\frac{3}{4}$



B. Half of 32 is 16, so ____ of 32 is 8.

a. $\frac{1}{4}$

b. $\frac{1}{2}$

c. $\frac{3}{4}$

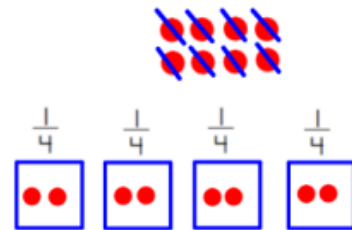
→ same as Q.1-A

C. What is a quarter of 8?

a. 2

b. 6

c. 4



D. What is a quarter of 28?

a. 8

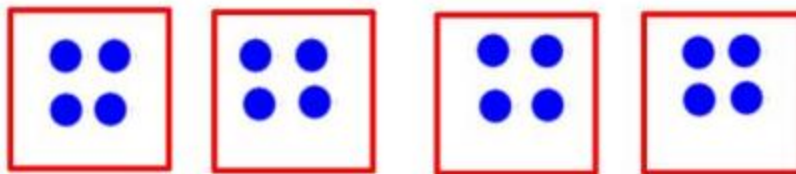

b. 6

c. 7

→ same as Q.1-C

Q.2) $\frac{1}{4}$ of 16 marbles is 4.

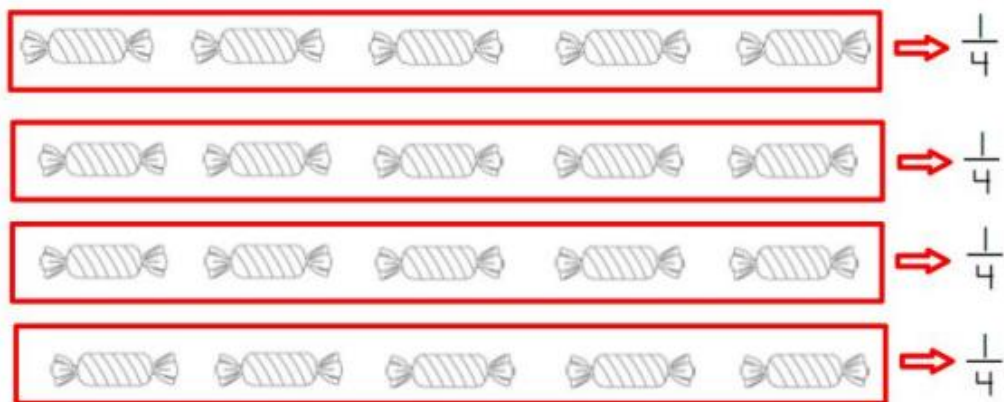
Draw to show your answer.



Q.3) If 5 candies are a quarter of a box.

How many candies are in one box? 20

Draw to show your answer.



Draw three more equal groups

Q.4) Sanad gives $\frac{1}{4}$ of his stamps to Laith.

If there are 9 stamps left with him as shown below.

How many stamps were there in the beginning? 12

Draw to show your answer.

