



Rosary School / Marij El Hamam
Science Worksheet (7.A.1)

Name: _____

Grade I ()

Date: _____

Electricity

I. Draw a line to match the picture to the main use of electricity.



light up spaces



make things move



make sound



to do work







produce heat

2. What do these devices produce to be useful to us?
Tick (✓) the correct boxes.

	sound	light	heat	movement
microwave			✓	
TV	✓			
escalator				✓
table lamp		✓		

3. Which appliances use cells? Circle the two correct appliances.

mobile phone	toaster	fridge	clock
			

4. Which are **not** ways to be safe with electricity? Circle **two** options.

touch a lit lamp

use electrical appliances that have batteries

use electrical appliances that have wires

use many plugs in one power outlet