

Rosary School / Marj El Hamam
Science Worksheet (7.A.1)



Name: _____

Grade 1 ()

Date: _____

Electricity

Objective : Name ways in which we use electricity and how we can use it safely.

1. Draw a line to match the picture to the main use of electricity.




●

● light up spaces



●

● make things move



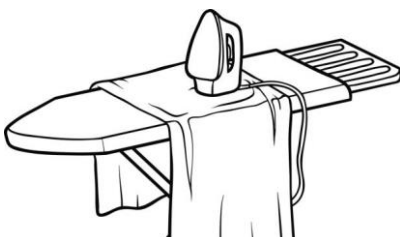
●

● make sound



●

● to do work



●





● produce heat

2. What do these devices produce to be useful to us?

Tick (✓) the correct boxes.

	sound	light	heat	movement
microwave				
speakers				
escalator				
table lamp				

3. Which appliances use cells(batteries) ? Circle the **two** correct appliances.

mobile phone	toaster	fridge	clock
			

4. Which are **not** ways to be safe with electricity? Circle **two** options.

touch a lit lamp

use electrical appliances that have batteries

use electrical appliances that have wires

use many plugs in one power outlet

