

Worksheet D

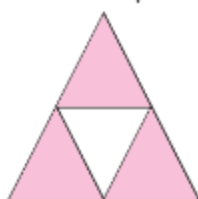
Find Three Quarters of a Shape and a Set

Level 1 Level 2 Level 3

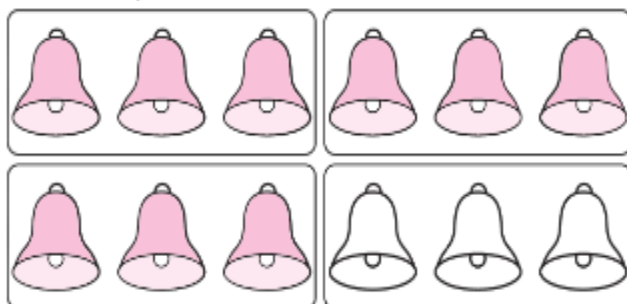
If you are not sure, you can refer to Student's Book pages 178 to 180.



- 1 a Colour $\frac{3}{4}$ of the shape.



- b Colour $\frac{3}{4}$ of the bells.



- 2 Fill in the blanks.



- a $\frac{1}{4}$ of 8 is 2.


- b $\frac{3}{4}$ of 8 is 2 + 2 + 2 = 6.



3 $\frac{3}{4}$ of a number is 18.

What is the number? 24

Draw to show.



$\frac{3}{4}$ of the bulbs are yellow.

How many bulbs are yellow? 15

Circle the bulbs
into 4 equal
groups.



- 5 $\frac{1}{4}$ of a packet of flour can make 5 cakes.

Is Ron correct?

Explain your answer.

Ron is correct.

$\frac{1}{2}$ is the same as $\frac{2}{4}$.

$$5 + 5 = 10$$

$\frac{1}{2}$ of a packet of flour can make 10 cakes.

