


Worksheet A

Find $\frac{1}{4}$ of a Shape

Level 1 Level 2 Level 3

- 1 Cross the cakes with four unequal parts.

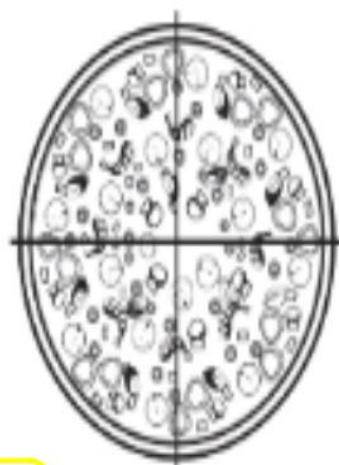
If you are not sure, you can refer to Student's Book pages 168 to 170.



2 a Shade $\frac{1}{4}$ of the pizza.

b The pizza is split into 4 equal parts.

c Each part is called a quarter.



Level 1 **Level 2** Level 3

3 $\frac{1}{4}$ of a shape is shown.

Draw to complete the shape.

a




b



a



b



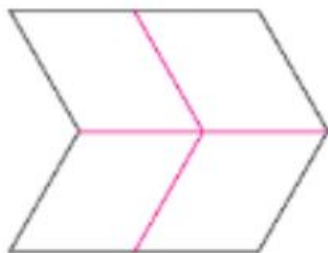
- 4 Draw only two lines to divide each shape into quarters.
Show two different ways.

a

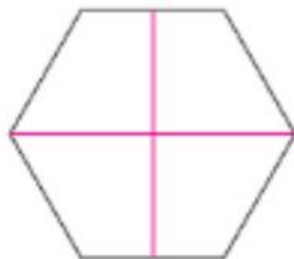


- 5 Draw lines to divide each shape into quarters.

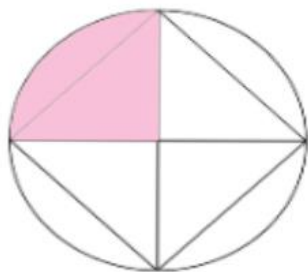
a



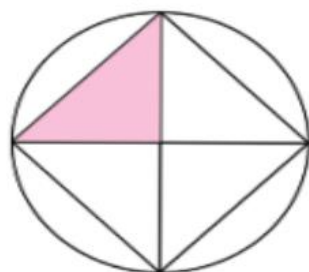
b



a Colour $\frac{1}{4}$ of the circle.



b Colour $\frac{1}{4}$ of the square.



c Draw two lines to divide the square into quarters in a different way.

Colour $\frac{1}{4}$ of the square.

