





Describe and Compare Masses (I.I.B.I)

Date: _____

1. Circle the **heavier** animal and cross out the **lighter** animal in each picture.

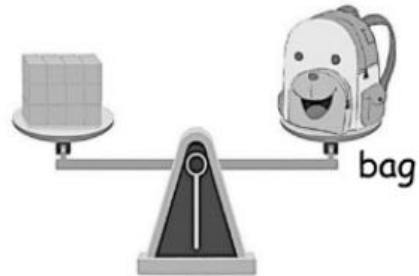
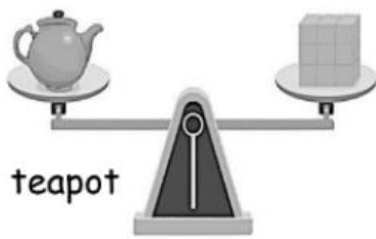


2. Look at the pictures. Complete the sentences using the words (**heavier**, **lighter**, **heaviest** and **lightest**).



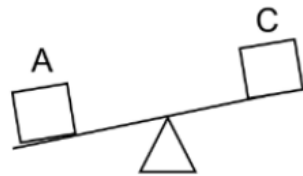
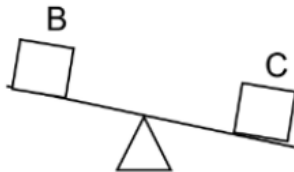
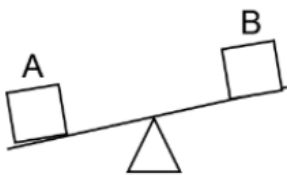
- (a) The scissors are lighter than the glue.
- (b) The glue is heavier than the scissors.
- (c) The scissors are heavier than the marker.
- (d) The marker is the lightest.
- (e) The glue is the heaviest.

3. Which object is the heaviest? the bag



4. Francis says that box C is the heaviest.

Is he correct? Why?



No, Francis is not correct because box C is heavier than box B, but is lighter than box A. So, it is not the heaviest.

