

Worksheet B


Find $\frac{1}{4}$ of a Set

Level 1 Level 2 Level 3

If you are not sure, you can refer to Student's Book pages 171 to 174.




1 Fill in the blanks.



- a 24 flowers are split into 4 equal groups.
b Each group has a quarter of 24.
c $\frac{1}{4}$ of 24 = 6

2 What is $\frac{1}{4}$ of 16? 4




Draw circles around the rings to help you.



p. 140

- 3 The picture shows $\frac{1}{4}$ of all balls.



How many quarters are there in 1 whole?



How many balls are there in total? 12

Draw to show.

- 4 $\frac{1}{4}$ of a number is 7.

What is the number? 28

Explain your answer.

Answers vary. For example:

You can draw to help you.



p. 141