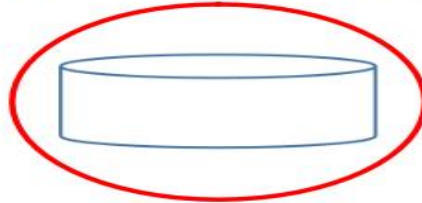


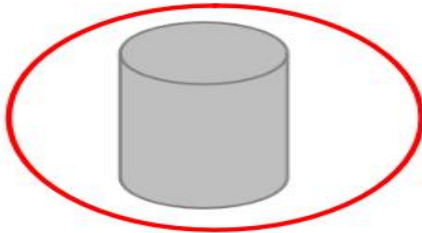
Date: _____

1. Draw a ring around the container with the **larger** capacity.

(a)



(b)



Activa
Go to Sa

p.24

2. Write the number of the item that holds less for each row.

1	 bucket	Less			More	
2	 teacup		2			

1	 mug	Less			More	
2	 wheelbarrow		1			

1	 pool	Less			More	
2	 jar		2			

3. Using the word bank, label the containers below.

full

empty

half full



full



empty



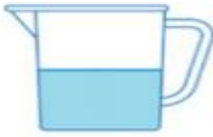
empty



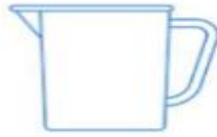
full



full



half full



empty



empty



full



half full

4.

pail



jug



vase



teapot



Order the containers from the largest to smallest capacity.

pail, vase, teapot, jug

largest capacity

