

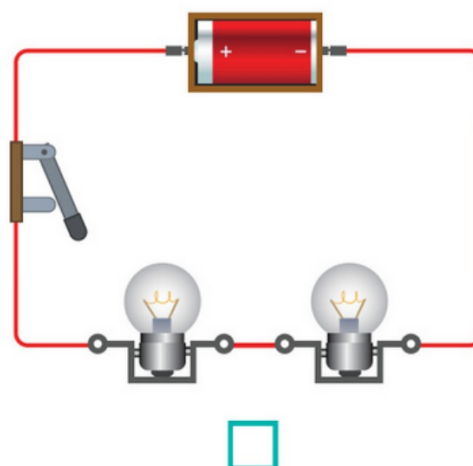
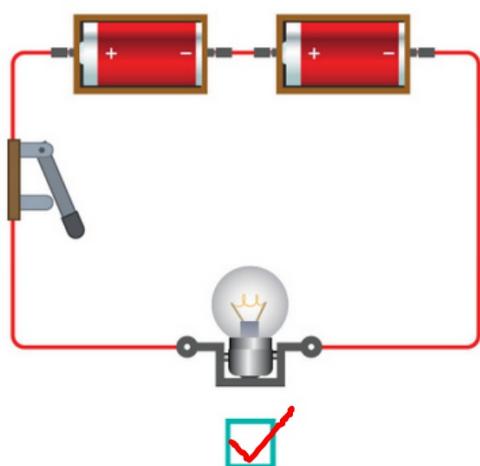
Practice Worksheet

I. Tick (✓) the correct box beside each sentence.

	True	False
A lamp will light up if there is a break in the circuit.	<input type="checkbox"/>	<input checked="" type="checkbox"/>
A switch opens and closes a circuit.	<input checked="" type="checkbox"/>	<input type="checkbox"/>
Adding more cells makes a lamp in a circuit brighter.	<input checked="" type="checkbox"/>	<input type="checkbox"/>
Electrical wires are made of plastic.	<input type="checkbox"/>	<input checked="" type="checkbox"/>
Copper is a good electrical conductor.	<input checked="" type="checkbox"/>	<input type="checkbox"/>
Insulators are materials that do not allow the flow of electricity.	<input checked="" type="checkbox"/>	<input type="checkbox"/>

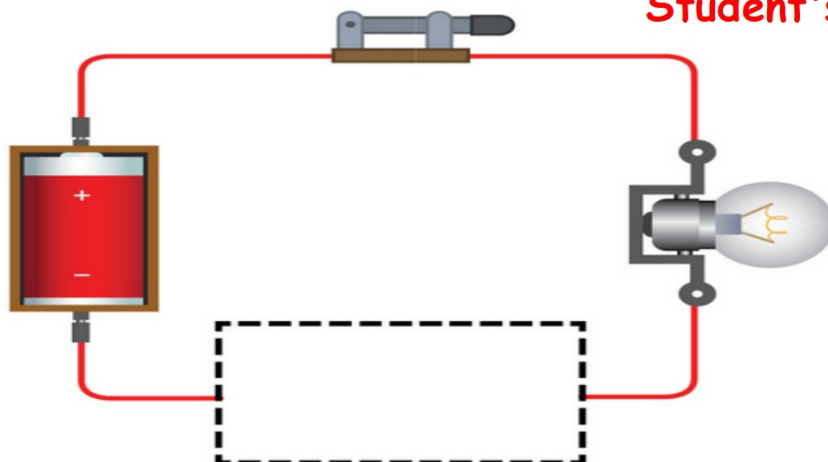
Student's Book p.134

2. Wei Li made two circuits as shown below.
Tick (✓) the circuit where the lamp(s) will be brighter when the switch is closed.



3. Bala and Putri made the circuit below. There is a break in the circuit.

Student's Book p.135



Which of the following items will close the circuit so the lamp will light up?
Circle the **two** correct answers.



iron nail



rubber band



plastic straw



wooden toothpick



glass lens



silver coin