


Look Back



How many halves make 1 whole? 2



How many halves make 2 wholes? 4

Explain to a partner.

2 halves make 1 circle

4 halves make 2 circles.

Thinking Cap

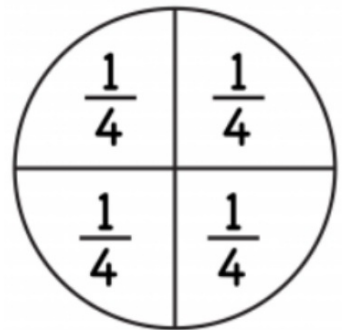



How many quarters make 1 whole?
Why do you say so?
Use fraction circles to help you.



There are 4 quarters in 1 whole.


Drag and drop to make 1 whole circle.



Let's Learn

You can combine fractions together to make new fractions.
To combine fractions, you put the equal parts together.

a



Two halves make one whole.

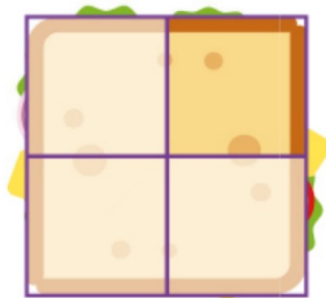
Three halves make one and a half.

P.188

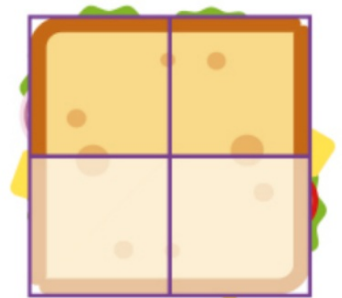
b



one quarter



one quarter

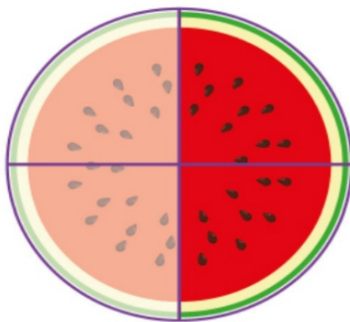


one half

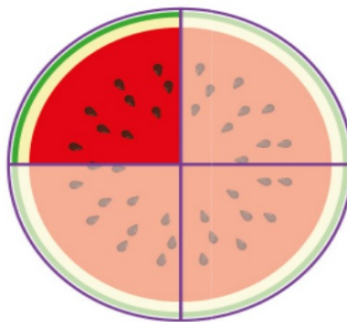
One quarter and one quarter make one half.

P.188

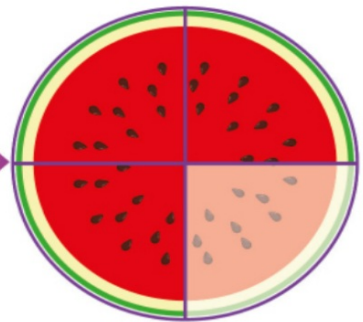
c



two quarters
or
one half



one quarter



three quarters

One half and one quarter make three quarters.

How many quarters
make 2 wholes?

8 quarters make 2 wholes



Let's Practise

- I Some cake rolls are split into parts.
Complete the statements based on the diagrams.



two quarters and one quarter make three quarters.



What other ways can you make three quarters?

one half and one quarter

P.189


2 There are 10 children.

Each child gets $\frac{1}{4}$ of a pizza.

How many halves are there? **There are 5 halves.**



Explain to a partner by drawing a diagram.





- 3 Tuna pies are cut into quarters and fruit pies are cut into halves.

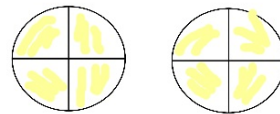
Ravi takes 8 slices of tuna pies.

Jon takes 3 slices of fruit pies.

Who has more?

Explain why.

tuna
pie



8 quarters = 2 wholes
3 halves = one and a half
2 wholes is more than one
and a half

fruit
pie

