

Student's Book p.87

Let's Practise

I What 3D shapes are used to build this structure?

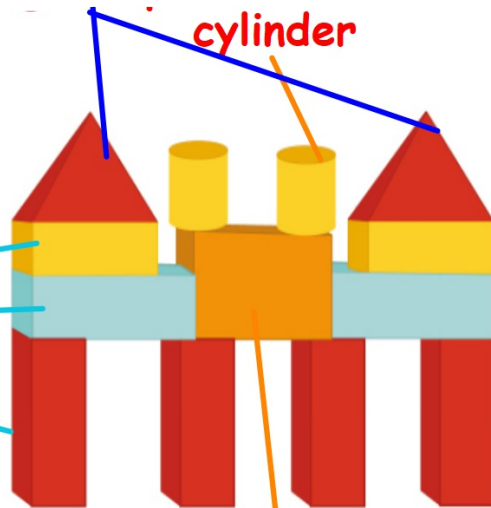
cuboids/ rectangular prism

rectangular pyramid

cylinder

cuboid

He uses rectangular pyramid, cylinder, cuboids/rectangular prisms

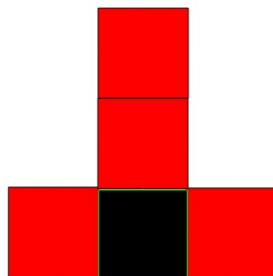
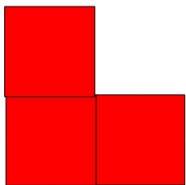



Student's Book p.87



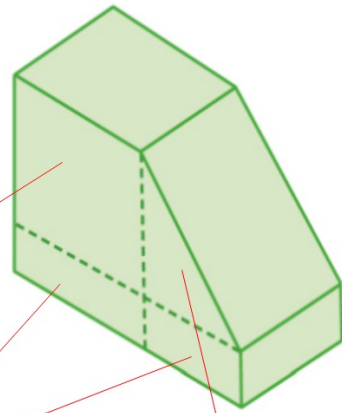
- 2 Caz says there are 8 cubes in this structure. Do you agree? Explain why.

No, There are 9 cubes.
There is a hidden cube.



Student's Book p.87

- 3 What 3D shapes are used to build this structure?
Name the 3D shapes.



A cube

A cuboid

A triangular prism