


Let's Practise

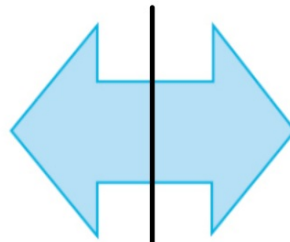
I Which of these 2D shapes are symmetrical?



Shape A



Shape B

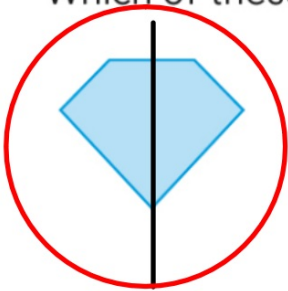


Shape C

a Draw the line(s) of symmetry.

Student's Book p.90

- 2 I am a 5-sided irregular polygon. I have one line of symmetry.
Which of these shapes am I?



regular pentagon



quadrilateral



hexagon

Student's Book p.90

- 3** Use the stickers on page 248. Complete the pattern so that the figure has two lines of symmetry.

