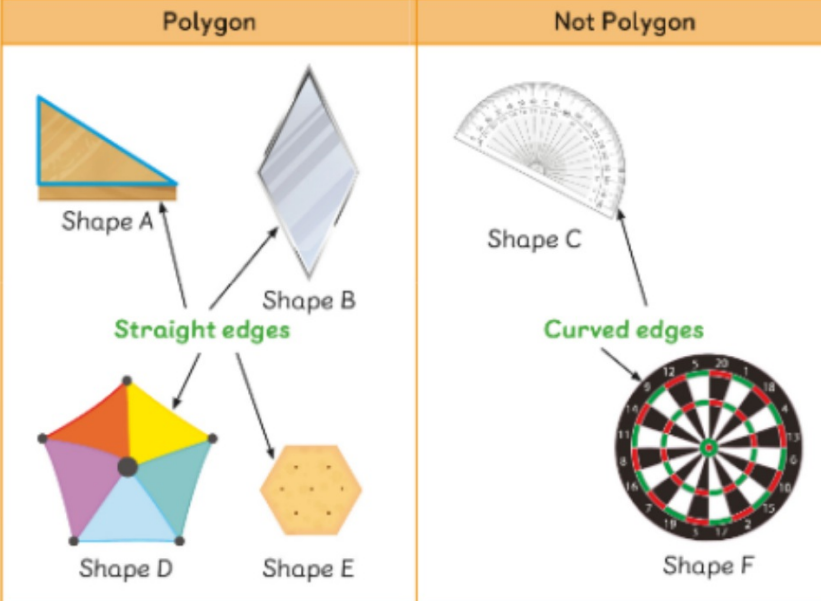


## Let's Learn

Student's Book p. 76

- a Li Min sorts some shapes into the table as shown.

Polygon	Not Polygon
 <p>Shape A</p> <p>Shape B</p> <p>Straight edges</p> <p>Shape D</p> <p>Shape E</p> <p>Shape C</p> <p>Curved edges</p> <p>Shape F</p>	






Shapes C and F are not polygons.

Shape C is a semi-circle. It has a straight edge and a curved edge.

Shape F is a circle. It has a curved edge.

Student's Book p. 76

What other polygons  
can you think of? Sketch  
and show your partner.




b Idris draws some patterns with polygons.




Pattern A



Pattern B




Pattern C




Pattern D

In Pattern A, the polygon used is  triangle.

In Pattern B, the polygon used is .

In Pattern C, the polygon used is .

In Pattern D, the polygons used are  and  rhombus.

What other patterns can you think of? Sketch and show your partner.

