

Worksheet C

Classify and Sketch 3D Shapes

Activity Book p.65

Level 1 Level 2 Level 3

I Match.

a



b



c



d



e



If you are not sure, you can refer to Student's Book pages 82 to 84.



triangular prism

triangular pyramid

rectangular prism

square pyramid

Think of the properties of each 3D shape.





2 Fill in the blanks.



This is a triangular prism

It has 2 triangular bases,

3 rectangular faces and 6 vertices.

Activity Book p.66

3 What 3D shapes do you see in these objects?

a



cube

b



cylinder

c



sphere

d



cone

Activity Book p.67



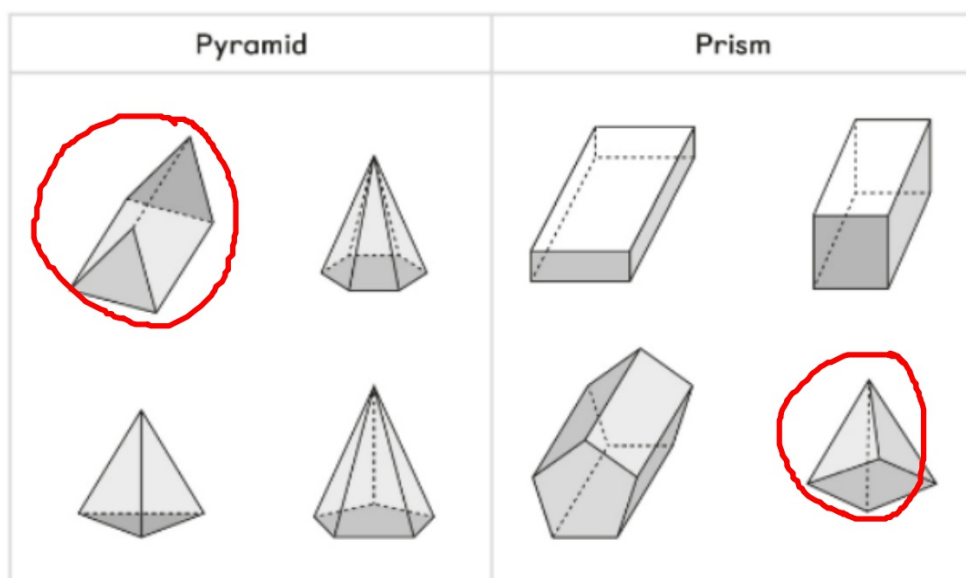
4 Which 3D shape does each statement describe?

Write "prism" or "pyramid".

No.	Statement	3D Shape
1	It has only one base. The base is a polygon.	pyramid
2	It has two bases of the same shape.	prism
3	It has a triangular base and three triangular faces that fit together.	triangular pyramid

Activity Book p.67




5 Circle the odd one out in each category.





- 6 Identify the 3D shapes in each object.
Sketch the 3D shapes.

Activity Book p.68

Object	Name of 3D Shape	Sketching
	rectangular prism /cuboid	
	cube	
	triangular prism	