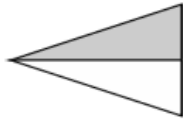


Find Half of a Number of Objects (13.B.1)

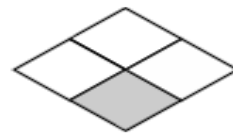
Date: _____

1. Draw a ring around the shape that has half of it shaded.

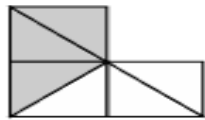
(a)



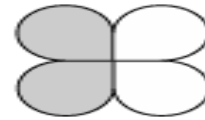
(b)



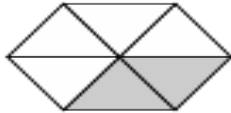
(c)



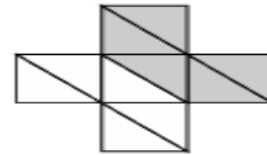
(d)



(e)



(f)




2.



Mindy says half of these sweets are 6. Is she correct? Why?

3. There are 6 boys and girls in a class.
Half of the boys and half of the girls wear a watch.
There are more girls than boys.
How many girls wear a watch?

4. Find half of these numbers and fill in the blanks in the box.




Half of _____ is _____.




Half of _____ is _____.



Half of _____ is _____.



Half of _____ is _____.



Half of _____ is _____.