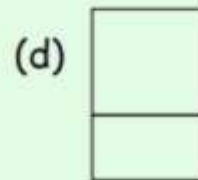
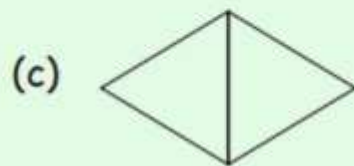
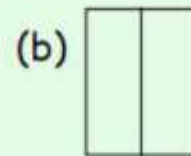
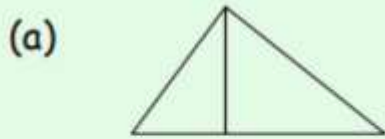


Booklet p.34


Tell What Equal and Unequal Parts of a Whole Are (13.A.1)

Date: _____

1. Colour the shapes that are split into two equal parts.



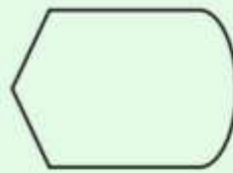
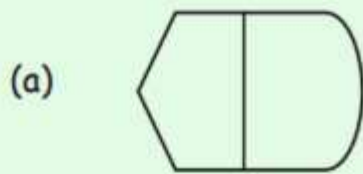


2. Sort the pictures below. One is done for you.

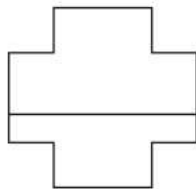


Equal Parts	Unequal Parts

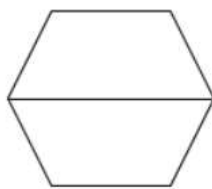
3. Linda draws lines to cut some shapes into equal parts, but she does these two shapes wrong. Draw lines to fix her mistakes.



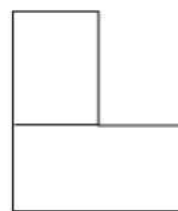
4. Look at the shapes.



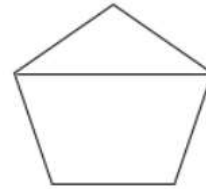
A



B



C



D

Which shape is the odd one out? Why?

THANK
YOU 😊