

## Worksheet E

Activity Book p.71

### Identify Lines of Symmetry

Level 1 Level 2 Level 3

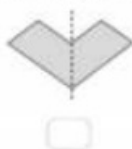
If you are not sure, you can refer to Student's Book pages 88 to 90.



- 1 Which of the following is not a line of symmetry?

Put a cross (X) in the box.

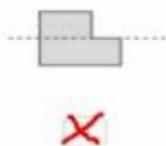
a



b



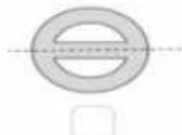
c



d



e




f



2 Draw a line of symmetry in each of these figures.

a



b




c



d



3



Who is correct? Explain your answer.

**Caz is correct. A line of symmetry divides a figure into two halves. Each half is the mirror image of the other. This shape cannot be cut in a way that the 2 halves are mirror images of each other. So it has no line of symmetry.**

