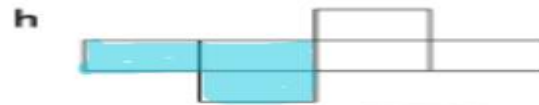
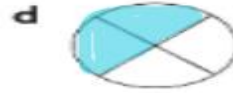




## Find Half of a Number of Objects

Level 1 Level 2 Level 3

1 Shade half of each shape.



If you are not sure, you can refer to Student's Book pages 167 to 170.



i How do you know your answers are correct in a-h?

**The two halves of each shape make two equal parts.**

Are the shaded and unshaded parts equal?



Level 1 Level 2 Level 3

p.119

2 How many is half of these objects?



3



4



5



10

e What do you notice about the number of objects in each question?

**The numbers are all even.**

- 3 a Paste 8 stamps equally on 2 envelopes.



Each envelope has 4 stamps.

Activa  
p.120

- b Put 12 beads equally into 2 bags.



Each bag has 6 beads.

Act  
Go t

- c Put 16 beads equally into 2 packets.



Each packet has 8 beads.

p.120

- d Put 18 pencils equally into 2 boxes.



Each box has 9 pencils.

Ac  
Gc


- 4 Which of these can be put equally into two boxes?  
Put a tick in the box.




Level 1 Level 2 Level 3

p.121

- 5 There are 8 oranges, 10 cherries and 6 apples.  
These are to be given equally to 2 families.  
How many fruits does each family get?  
Draw in the boxes to help you find the answer.



Family 1



Family 2