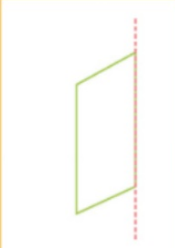





Let's Practise

Student's Book p.93

- 1 Which of the following is a reflection of the given shape?
Colour the correct reflection.

Shape	Image		
 mirror line			

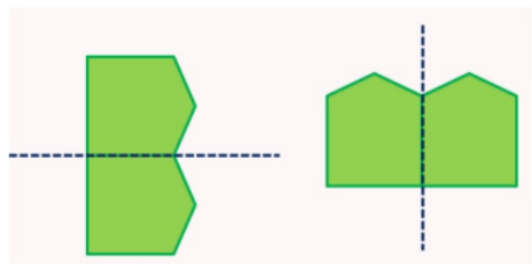


- 2 Sketch the reflections of the given shapes.

a



b

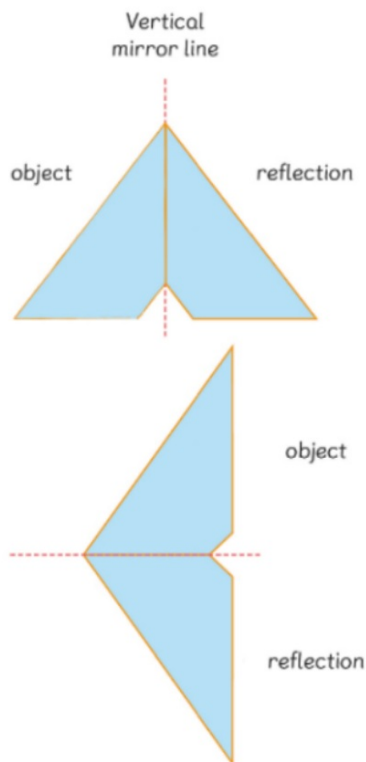




3 Carl sketched the reflections of the given object on a horizontal mirror line and on a vertical mirror line.

Is Carl correct? Explain.

Student's Book p.94



Carl is correct.

