

Worksheet F

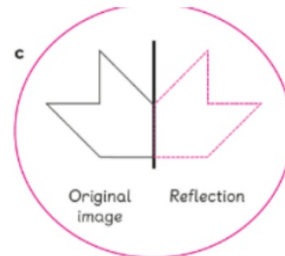
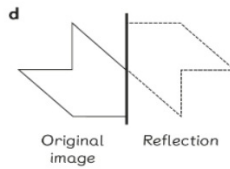
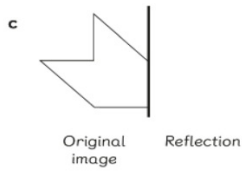
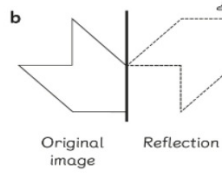
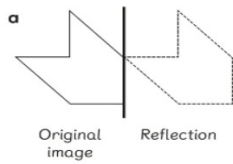
Sketch Reflections of 2D Shapes

Activity Book p.73

Level 1 Level 2 Level 3

- I Which of the following shows a reflection?
Circle and trace the reflection.

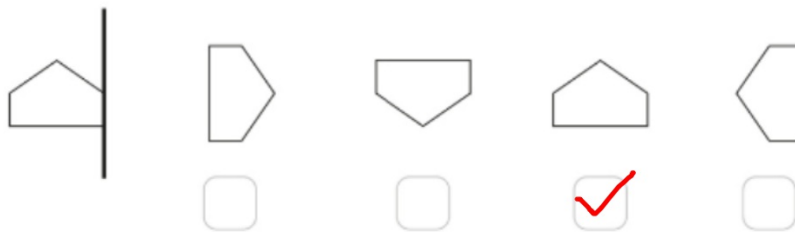
If you are not sure, you can refer to Student's Book pages 91 to 94.



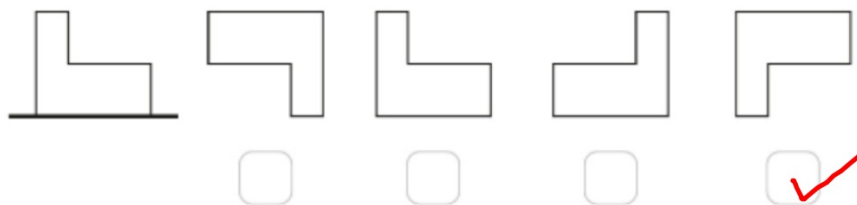
Activity Book p.74

2 Put a tick (✓) in the box for the correct reflection.

a

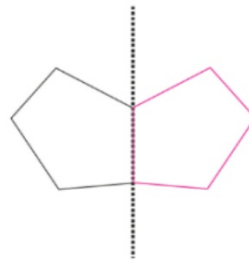
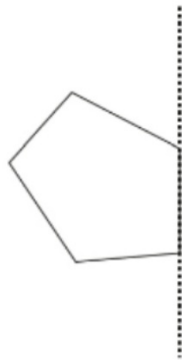


b



Activity Book p.74

- 3 Sketch the reflection of the given shape.



- 4 Caz draws a shape.
She places a mirror on the shape.
Sketch the shape she sees now.

