


Know 1, 2, 5 and 10 Times Tables (Q.C.I)

Date: _____

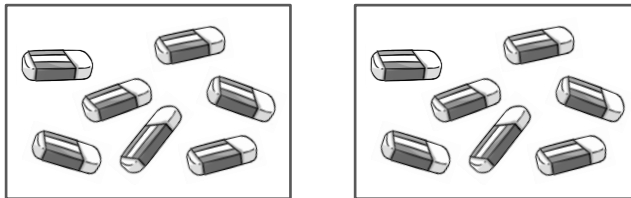
Q.1) Fill in the blanks.

(a)




$4 \times 2 = \underline{\hspace{2cm}}$

(b)



$2 \times 7 = \underline{\hspace{2cm}}$

(c)



$5 \times 9 = \underline{\hspace{2cm}}$

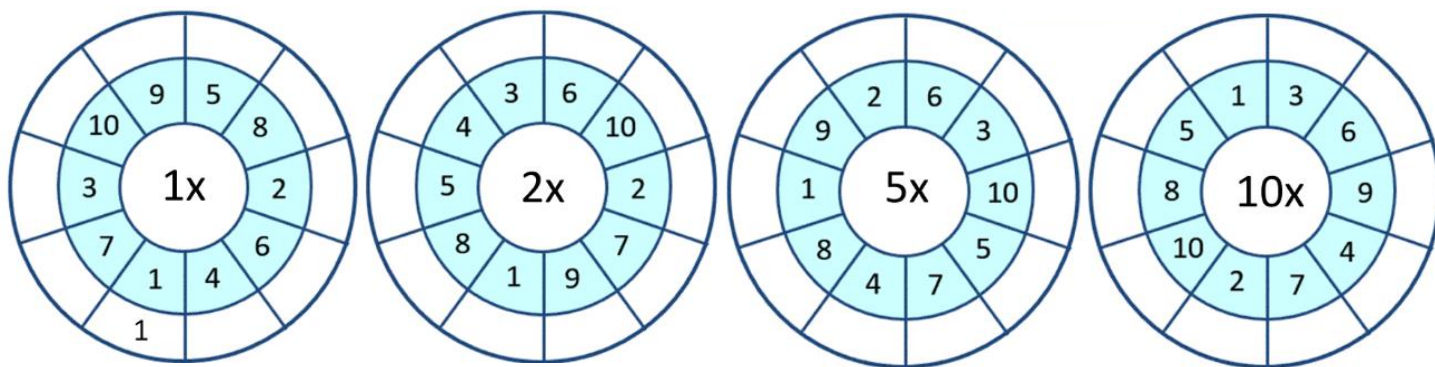
Q.2) A goat has 2 horns.
How many horns do 8 goats have?

$\square \bigcirc \square = \square$




8 goats have _____ horns.

Q.3) Complete the multiplication wheels.



Q.4) Draw a line to connect each picture to the correct times tables fact.



•

• 7×3




•

• 6×4



•

• 4×3



•

• 2×8



•

• 8×3