

# Worksheet A

## Read and Write Numbers to 1000


Level 1 Level 2 Level 3

If you are not sure, you can refer to Student's Book pages 2 to 5.



I Write the numbers.

a



Three hundred and thirty-four

334

K

b Nine hundred and twenty-six

926

U

c Eight hundred and ten


810

y

## Activity Book p. 1

2 Write the numbers in words.

a



115

one hundred and fifteen

E

b

507

five hundred and seven

T

c

498

four hundred and ninety-eight

R

## Activity Book p. 2

This country is in the Middle East.

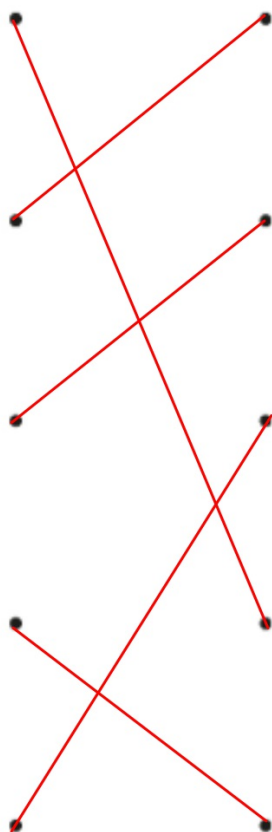
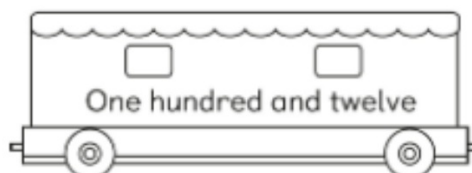
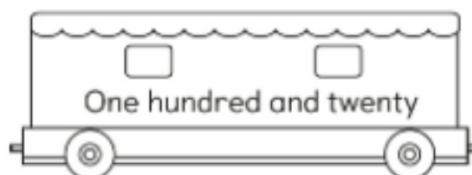
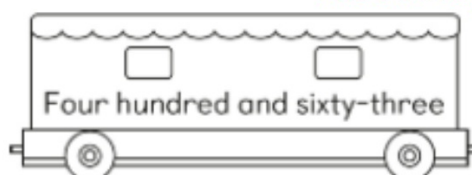
Match the letters with your answers in 1 and 2 to find out.

<b>T</b>	<b>U</b>	<b>R</b>	<b>K</b>	<b>E</b>	<b>Y</b>
Five hundred and seven	926	Four hundred and ninety-eight	334	One hundred and fifteen	810

The country is Turkey.

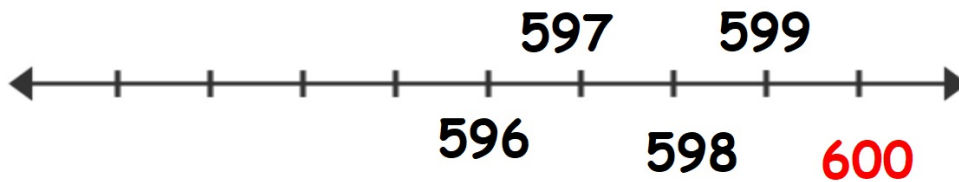


3 Match.

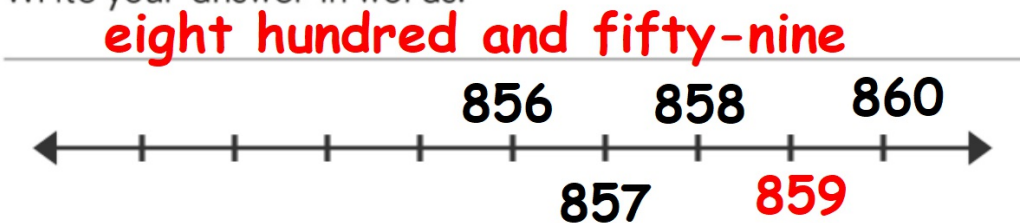


## Activity Book p. 3


- 4 What number is just after five hundred and ninety-nine?  
Write your answer in numbers. 600



- 5 What number is just before 860?  
Write your answer in words.



- 6 What number is between 212 and 214?  
Write your answer in numbers. 213





7 Jack uses some balloons to build his pirate ship.

Activity Book

p. 3

The number of balloons used is a 3-digit number.

The number is more than 207.

The number is less than 540.

The second and third digits are the same.

The first digit is half of the second digit.



The number of balloons is greater than 207 and smaller than 540

$207 < \text{number of balloons} < 540$

$$207 < \text{number of balloons} < 540$$

so the digit in the hundreds place has to be 2, 3 or 4

hundreds	tens	ones
3	6	6

or

hundreds	tens	ones
4	8	8

or 244

## Activity Book p. 3

- a How many balloons does Jack use?

**366**

---

- b Are there other possible answers? If yes, what are the numbers? How do you know?

**Yes, 488 and 244**

---

207 < number of balloons < 540

so the digit in the hundreds place has to be either 2,3 or 4

---