

Hundreds

100	One hundred
200	Two hundred
300	Three hundred
400	Four hundred
500	Five hundred
600	Six hundred
700	Seven hundred
800	Eight Hundred
900	Nine hundred

Hundreds

100	One hundred
200	Two hundred
300	Three hundred
400	Four hundred
500	Five hundred
600	Six hundred
700	Seven hundred
800	Eight Hundred
900	Nine hundred

What numbers
can we make?

What if we put
hundreds with
tens with ones?

Tens

10	Ten
20	Twenty
30	Thirty
40	Forty
50	Fifty
60	Sixty
70	Seventy
80	Eighty
90	Ninety

Ones

1	one
2	two
3	three
4	four
5	five
6	six
7	seven
8	eight
9	nine

Pick a number from
each group and put
them together.

we can use this chart to help
us place and read the numbers
correctly

make your own number →

Hundreds 100	Tens 10	Ones 1
1	2	3
4	7	5
_____	_____	_____

one hundred and twenty-three

100 and 20 and 3 = 1 2 3

four hundred and seventy-five

400 and 70 and 5 = 4 7 5



Look Back

Eddy has 25 oranges.

How do you read the numbers?

What are the numbers in words?

twenty-five



Thinking Cap



Ralph has 125 strawberries. How do you read the numbers? What are the numbers in words? Discuss with your partner.



hundreds

1

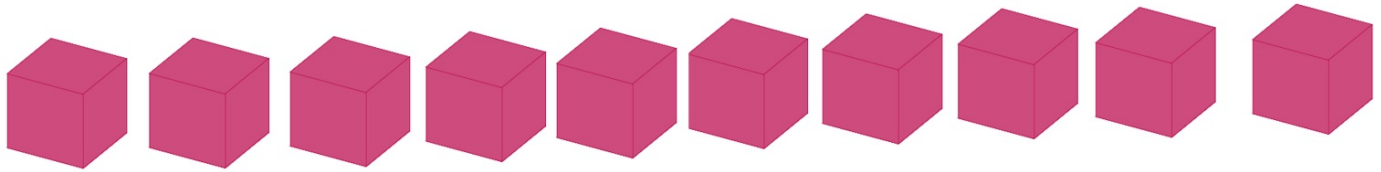
tens

2

ones

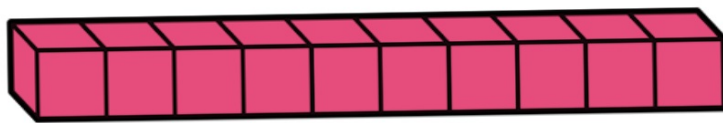
5

one hundred and twenty-five



10 one-cubes

10 one-cubes make 1 ten-stick



Let's Learn

a James puts 10  together to make .

1 ten-stick




10 one-cubes make 1 ten-stick

10 ones = 1 ten

= 10



count on in ones together

He puts 10  together to make



1 hundred flat

10 ten-sticks make 1 hundred flat

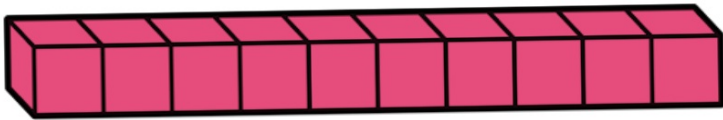


count on in tens together


10 tens

=

1 hundred

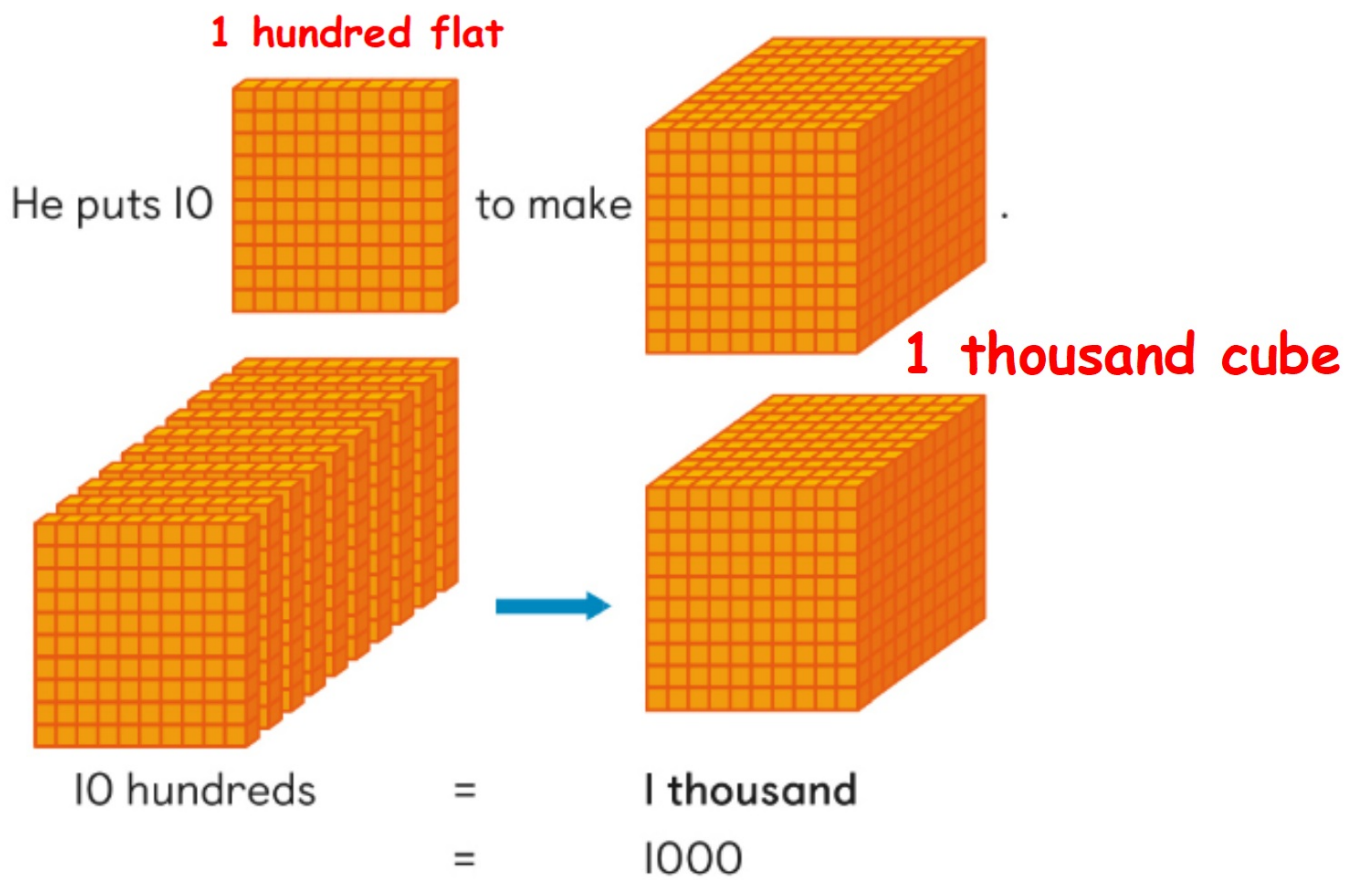


10 ten-sticks make 1 hundred flat



What if we count on in hundreds ?


Student's Book p.3



10 hundred flats make 1 thousand cube

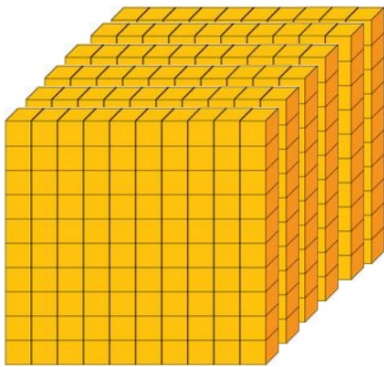
Student's Book p.3

He counts in 100s.

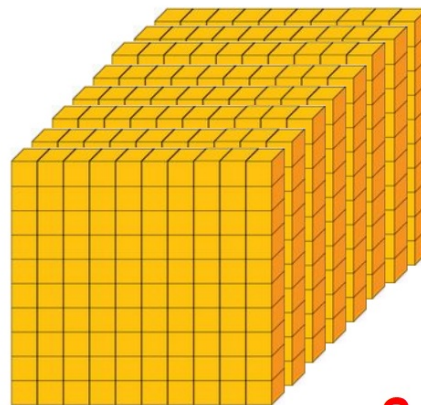


100 200 300 400
1 hundred 2 hundreds 3 hundreds 4 hundreds

... , 500, 600, 700,
800, 900, 1000.

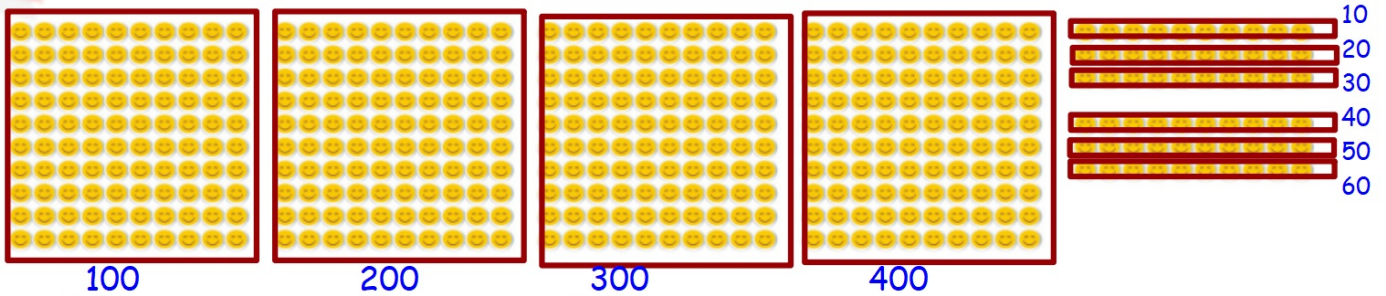


600
6 hundreds



800
8 hundreds

b Cindy has ^{HTO}460 stickers.




4 hundreds and 6 tens is 460.

She writes 460 as four hundred and sixty in words.

hundreds	tens	ones
4	6	0

Student's Book p.4

- c A shop owner has nine hundred and seventy-three bookmarks.



9 hundreds 7 tens 3 ones

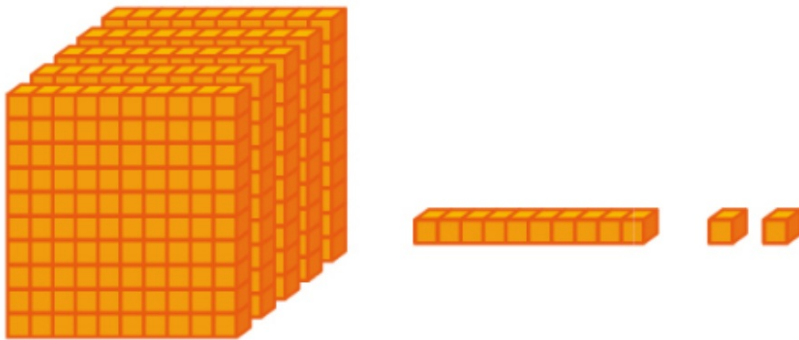
He has 973 bookmarks.

'nine hundred and seventy-three'.

Let's Practise

I Write in words.

a



512 five hundred and twelve

b

308 three hundred and eight

2 Write in numerals.

a eight hundred and ten

810

b six hundred and twenty-five

625

count on 1 more

3 What is the number after 349 in words.

350 : three hundred and fifty

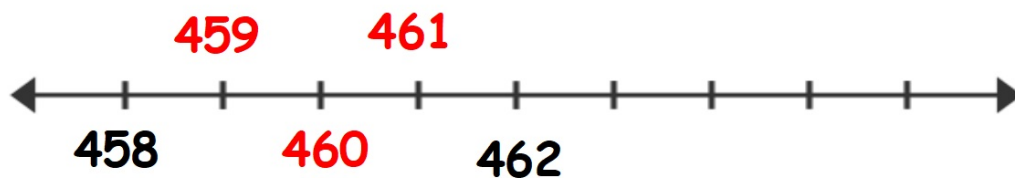
go back 1 one

4 What is the number before 1000?

Write your answer in numerals and in words.

999 : nine hundred ninety - nine

- 5 List the numbers between 458 and 462. Write your answers in numerals and in words.
- Student's Book p.5** do not write the 458 and 462



459 : four hundred and fifty-nine

460 : four hundred and sixty

461 : four hundred and sixty-one