

Let's Review

- 1 In which group does each object belong?
Tick (✓) the correct boxes.

	Living things	Things that were once alive	Things that have never lived
cooked prawn		✓	
pet fish	✓		
orange tree	✓		
plastic chair			✓

- 2 Which object does **not** belong in each group? Circle it.

a Living things



caterpillar



ant



ball

b Things that have never lived



nail



pumpkin



mug

c Things that were once alive



chick



log



tomato

3 Look at the table.



The table headings are missing. Write the correct headings to complete the table.






Use the words below.

living

never lived

once alive

	never lived	once lived	living
 metal spoon	✓		
 tomato plant			✓

	never lived	once lived	living
 glass jar	✓		
 sand	✓		
 leaf		✓	
 bee			✓
 shell		✓	

- 4 Write the names of the life processes being described.



Description	Life process
Living things can have young.	reproduction
Living things take in and use food.	nutrition
Living things become bigger.	growth
Living things can go from one place to another.	movement

5 This is Bot the Robot.

Page 11

Bot works in a factory. A factory is a place where objects are made. Bot makes more robots.



Is Bot a living thing? Why?
Circle **two** correct statements.

Yes. Bot can move.

Yes. Bot can make more robots.

No. Bot does not grow bigger.

No. Bot does not need food.