

Look Back



Student's Book p.17

In 452, which place value is the digit 5 in? *Tens place*

Which digit is in the ones place? *2*

How do you know? *452 is 4 hundreds 5 tens 2 ones.*

5 is in the tens place and 2 is in the ones place.



Thinking Cap



How can you classify the digits according to their place values?

100s	10s	1s
4	5	2

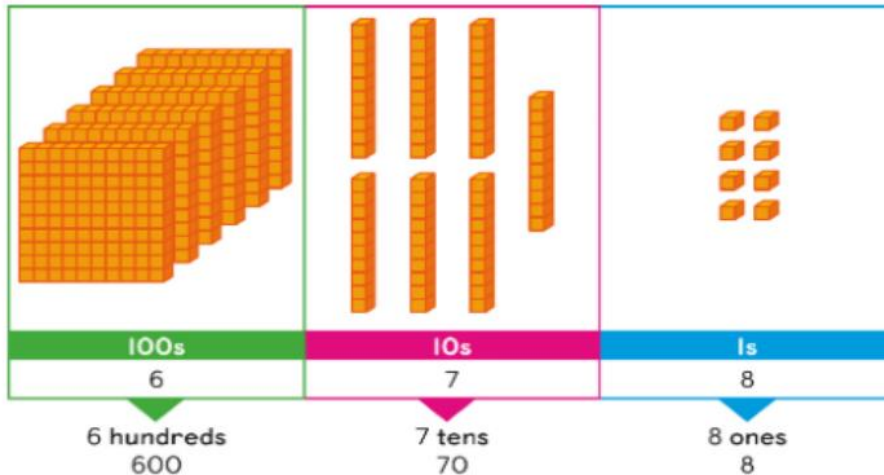


We can use a place-value chart. The digit 4 is in the 100s place, the digit 5 is in the 10s place, and the digit 2 is in the 1s place.

Let's Learn

Ron has 678 buttons. He uses cubes to show the number 678.

read the number



The **digit** 6 is in the hundreds place.

The digit 7 is in the **tens** place.

The digit **8** is in the ones place.

The value of the digit 6 is 600.

The value of the digit 7 is **70**.

The value of the digit **8** is 8.

The digit 0 is important. 308 is not the same as 38.



Ralph says 380 is the same as 38. Is he correct? Why or why not?



678 can be written as 6 hundreds 7 tens 8 ones

Let's Practise

Student's Book p.19

1 Fill in the blanks.

- a For 249, the digit in the hundreds place is 2.

100s	10s	1s
2	4	9

- b For 102, the digit 0 is in the tens place.

100s	10s	1s
1	0	2

- c For 283, the digit in the hundreds place is 2.

2 Circle the correct answer.

What is 6 hundreds and 4 ones in numbers?

64

604

640