


Look Back

p.2



Continue to count on from 10.

How many toy cars does Eddy have? **20**

How do you write these numbers in words?

Let's count together. (numerals and words)

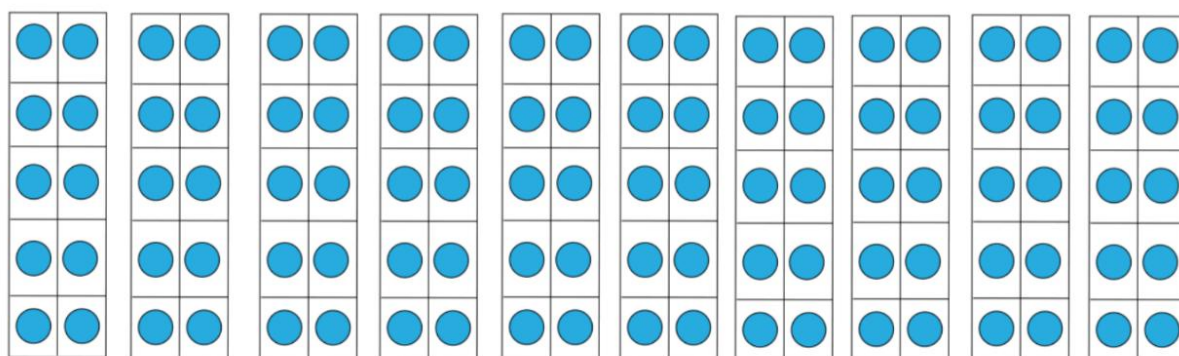
p.2

1	One	11	Eleven
2	Two	12	Twelve
3	Three	13	Thirteen
4	Four	14	Fourteen
5	Five	15	Fifteen
6	Six	16	Sixteen
7	Seven	17	Seventeen
8	Eight	18	Eighteen
9	Nine	19	Nineteen
10	Ten	20	twenty

Thinking Cap



Continue to count on from 20.
How do you think you can do that?



10 20

*We can continue counting on in 1s from 20: 21, 22, 23, 24, ...100.

*We can also count on in 10s from 20: 30, 40, 50, ...100.

Let's Learn

a Izzy counts the cookies in tens.

1 ten



10
ten

2 tens



20
twenty

3 tens



30
thirty

4 tens



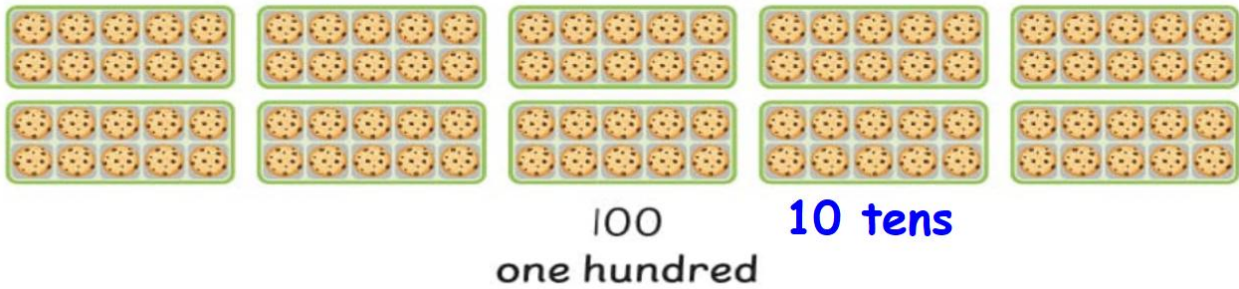
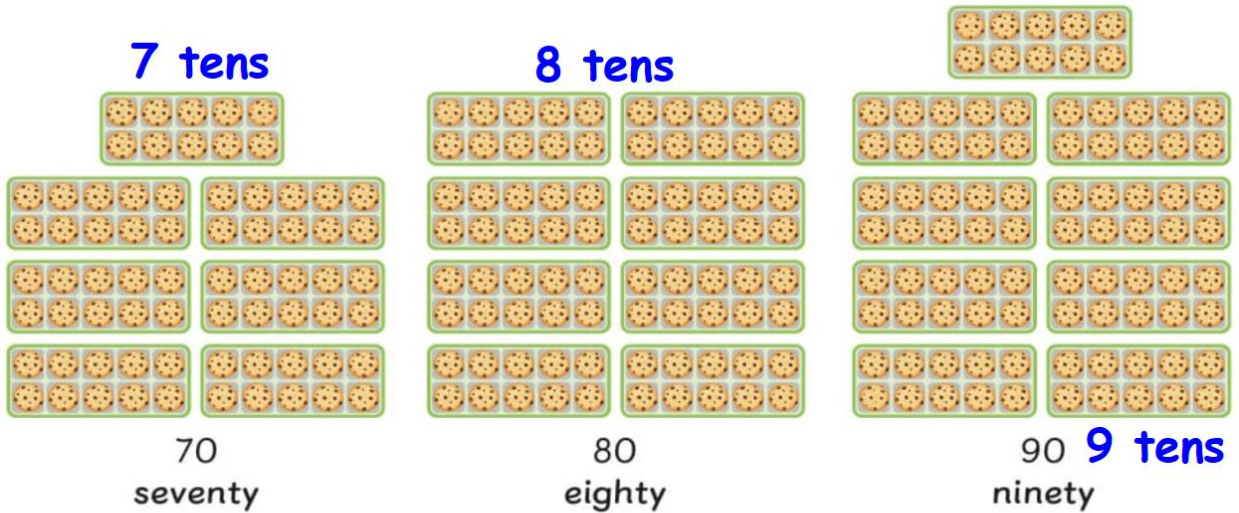
40
forty



50 5 tens
fifty

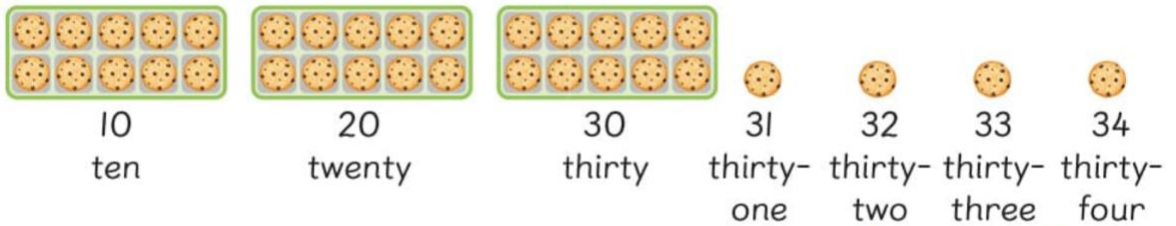


60 6 tens
sixty



- b** Aishah has some cookies.
She counts them in tens and ones.

p.4



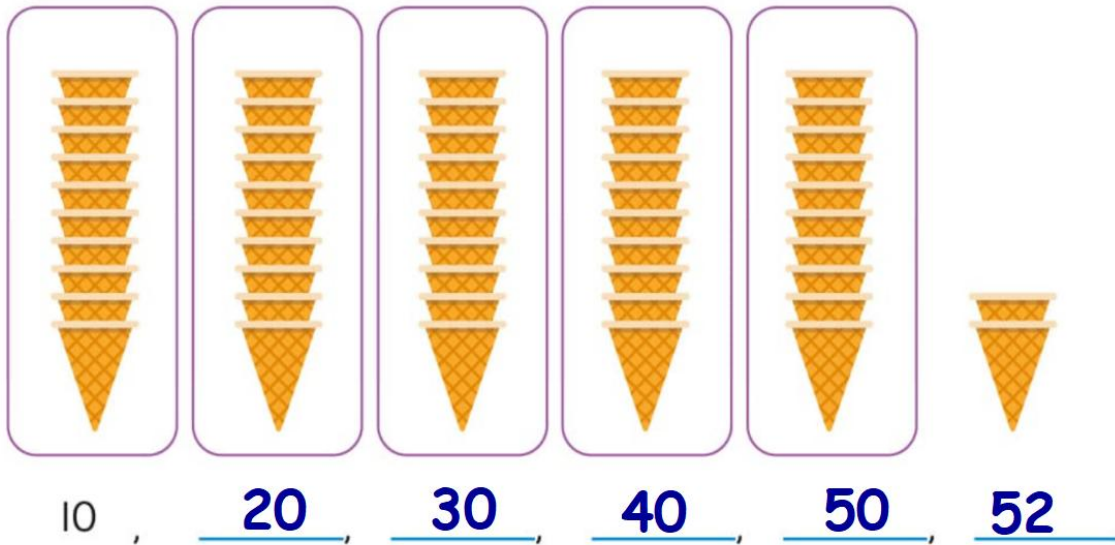
In numeral: 34

In word: thirty - four

Let's Practise

p.4

1 How many ice cream cones are there?




In numeral: 52

In word: fifty-two

2 Count. 43

p.5



in numerals: 43

in words: forty-three

3 Eddy and Izzy have 23 balloons. **p.5**

Draw the number of balloons Izzy has.



Count Eddy's balloons. 15

Count on to 23 as you draw Izzy's balloons.