

Rosary School / Marj El Hamam
Maths Worksheet (2.A.2)



Name: _____

Grade 2 ()

Date: Wednesday, October 1st, 2025

Chapter 2: Place value

Skill	Excellent	Very good	Good	Need improvement
tell the value and the place value in 3-digit numbers				

Objective: tell the value and the place value in 3-digit numbers

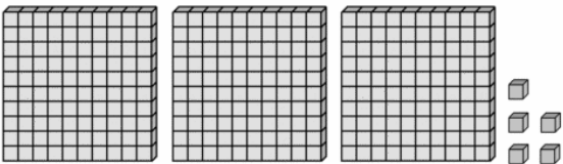
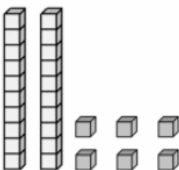
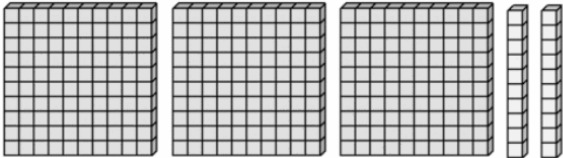
Q1. Write the correct digits in the place value chart.

	hundreds	tens	ones
257			
698			
ten tens			
ten ones			

Q2. Write the **value** of each underlined digit in the table below.

Number	value in numerals
a) 2 <u>9</u> 1	
b) 6 <u>0</u> 2	
c) 2 <u>1</u> 0	
d) <u>7</u> 43	
f) 34 <u>4</u>	

Q3. Fill in the place value chart with the correct digits.

	hundreds	tens	ones
a) 	_____	_____	_____
b) 	_____	_____	_____
c) 	_____	_____	_____

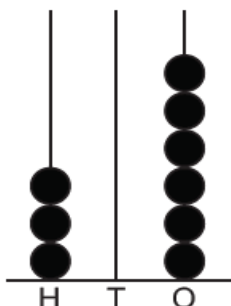
Q4. Write the number in standard form then answer the questions.



a) The digit in the tens place value is _____

b) The **value** of the digit in the hundreds place value is _____

Q5. Write the number that is shown on the counter frame.



- In numerals: _____
- In words: _____
- One more than the number is _____