

## Compare and Order Numbers (2.C.1)



Date: \_\_\_\_\_



Recognise the relative size of quantities to compare and order 2-digit numbers.

**Remember!**

Before you compare, you need to count.

I. Count and compare.



a)

Set A		9
Set B		14

14 is **larger** than 9

Set B has **more** cars than set A.

b)



Set A		11
Set B		6

6 is **smaller** than 11

11 is **larger** than 6


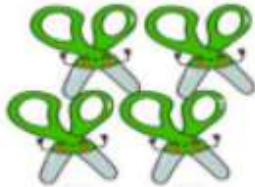
2. Count and compare.

Use fewer, more or same.

Set A	Set B
	
4	6

Set A has fewer flowers than set B.

Set B has more flowers than set A.

Set A	Set B
	

The number of objects in Set A is the same as the number of objects in Set B.

3. a) Colour the **larger** number.



b) Colour the **smaller** number.



4. Show the numbers on the number line.

a) 50, 32, 9



b) 89, 60, 100



5. Complete the sentences with 'greater' or 'smaller'.

a) 13 is smaller than 31.


b) 26 is smaller than 41.

c) 82 is greater than 80.

d) 17 is greater than 11.

e) 92 is smaller than 100.

6. Joy has 4 cards, help her to put the cards in order from the smallest to the largest.



27, 49, 72, 94

smallest

7. Winston has less than **30** toys.

Jessica has more toys than Phillip.


Winston has the most toys.

Write the child's name in order, beginning with the child who has the greatest number of toys.

**Winston**, **Jessica**, **Philip**  
greatest



8. Order the numbers from greatest to smallest.



<u>100</u>	<u>88 ones</u>	<u>8 tens 5 ones</u>	<u>6 tens</u>
greatest	(88)	(85)	(60)

Q. I am thinking of a number.

It is greater than 10 and smaller than 21.

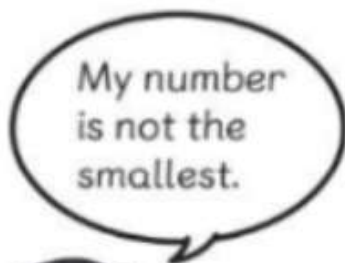
It is **NOT** a teen number

Write my number in the flower.



10. There are four number cards.


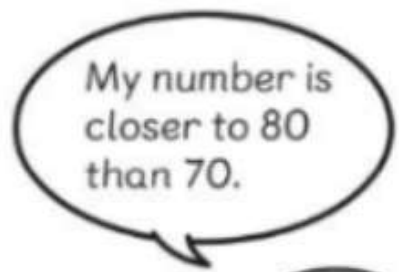
Ally, Ben, Carl and Daisy each takes a number card.



Ben



Carl



Ally

Which number does each child get?

Ally

**75**

Ben

**61**

Carl

**46**

Daisy


**37**

II. Compare the two numbers.

**90**



**59**



Which is greater? **9 tens**

12. Use these number cards to answer the following.



- a) Write the **smallest 1- digit** number.

**0**

- b) Write the **greatest 1- digit** number.

**7**

- c) Write the **smallest 2-digit** number.

**20**

- d) Write the **largest 2- digit** number.

**74**

- e) Write three numbers **greater than 47**.

**70** and **72** and **74**