


Look Back

Eddy has some balls.

15 balls

Izzy has some bean bags.

20 bean bags



Who has more items, Eddy or Izzy?

Count and find out.

Izzy has more items than Eddy.

Eddy has less items than Izzy.

Count with your partner to help him or her.



we look at the tens place first to compare

we look at the tens place first to compare

Thinking Cap



Ron has 40 hoops.

Who has the most number of items, Eddy, Izzy or Ron?

Why do you say so?

Use unit cubes to explain your answer.



Eddy has 15 items

Izzy has 20 items

Ron has 40 items

Ron has the most items.

The number '40' has the greatest 10s.

Let's Learn

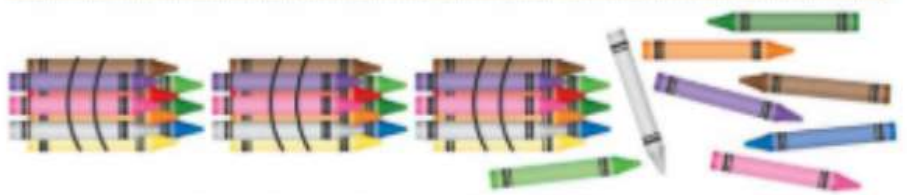
P.27

Izzy, Ralph and Caz have some crayons.

I have 24
crayons.



I have 38
crayons.



I have 28
crayons.



we look at the tens place first to compare

**If the tens are equal then compare the
ones place**

Let's Learn

P.27

Izzy, Ralph and Caz have some crayons.

I have 24 crayons.

I have 38 crayons.

I have 28 crayons.

They draw a number line to compare the numbers.

smaller numbers

greater numbers



We are counting on in ones from 20 till 40.

24 is **smaller** than 38.

38 is **greater** than 24.

24 is closer to 20 than to 30.
38 is closer to 40 than to 30.



Show 28 on the number line.

28 is closer to 30 than to 20.



How do you know
28 goes there?
Discuss with
your partner.

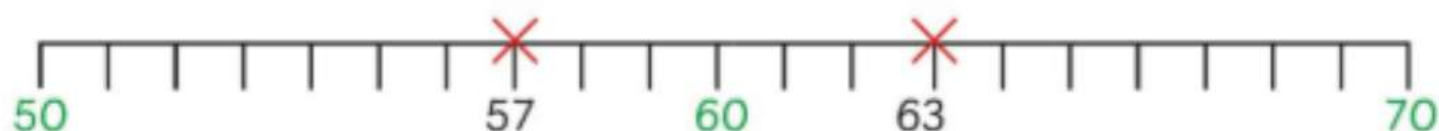


Arrange the three numbers in order, beginning from the smallest.

24, 28, 38
smallest greatest

Let's Practise

P.28



- a Fill in the blank with "greater" or "less".

57 is less than 63.

- b Mark the number 54 on the number line above.

Is 54 greater than or less than 57? less