

Compare and Order Numbers (2.C.1)



Date: _____



Recognise the relative size of quantities to compare and order 2-digit numbers.

Remember!

Before you compare, you need to count.

1. Count and compare.



a)

Set A		
Set B		

_____ is **larger** than _____

Set _____ has **more** cars than set _____.

b)



Set A		
Set B		

_____ is **smaller** than _____

_____ is **larger** than _____



2 Count and compare.

Use fewer, more or same.

Set A	Set B
	

Set A has _____ flowers than set B.

Set B has _____ flowers than set A.

Set A	Set B
	

The number of objects in Set A is the _____ as the number of objects in Set B.

3. a) Colour the **larger** number.

13	11
----	----

12	8
----	---

7	17
---	----

b) Colour the **smaller** number.


13	10
----	----

12	20
----	----

19	14
----	----

4. Show the numbers on the number line.

a) 50, 32, 9



b) 89, 60, 100



5. Complete the sentences with 'greater' or 'smaller'.

a) 13 is _____ than 31.


b) 26 is _____ than 41.

c) 82 is _____ than 80.

d) 17 is _____ than 11.

e) 92 is _____ than 100.

6. Joy has 4 cards, help her to put the cards in order from the smallest to the largest.



_____ , _____ , _____ , _____

smallest

7. Winston has less than 30 toys.


Jessica has more toys than Phillip.

Winston has the most toys.

Write the child's name in order, beginning with the child who has the greatest number of toys.

_____, _____, _____
greatest

8. Order the numbers from greatest to smallest.



_____, _____, _____, _____
greatest

Q. I am thinking of a number.

It is greater than 10 and smaller than 21.


It is **NOT** a teen number

Write my number in the flower.



10. There are four number cards.

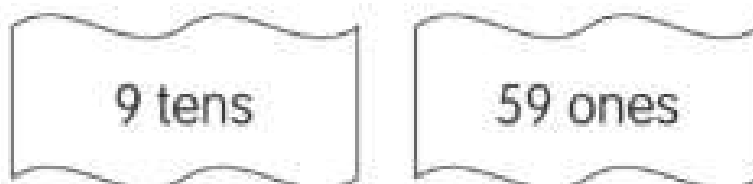
Ally, Ben, Carl and Daisy each takes a number card.



Which number does each child get?

Ally	Ben	Carl	Daisy
_____	_____	_____	_____

11. Compare the two numbers.



Which is greater? _____

12. Use these number cards to answer the following.



a) Write the **smallest 1- digit** number.

b) Write the **greatest 1- digit** number.

c) Write the **smallest 2-digit** number.

d) Write the **largest 2- digit** number.

e) Write three numbers **greater than 47**.

_____ and _____ and _____

