

Make Number Pairs to 20 (5.B.1)

Make Number Pairs to 100 (5.C.1)

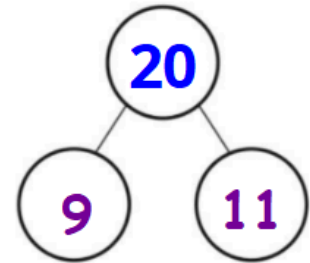
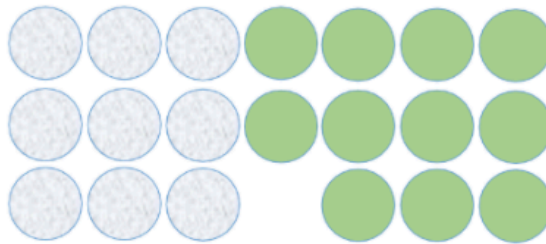


Recognise complements of 20 and complements of 100.

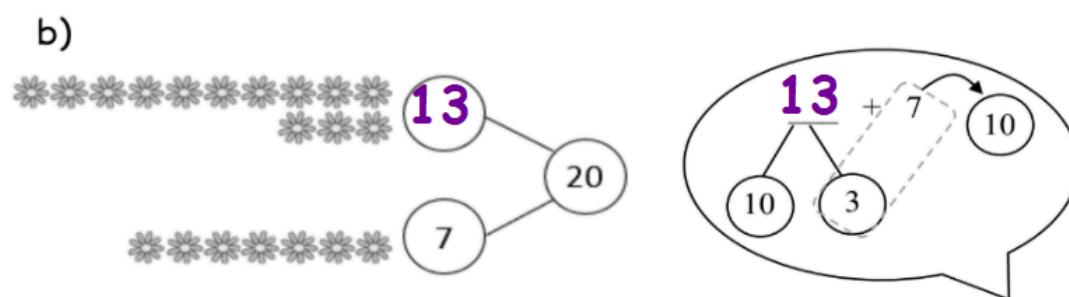
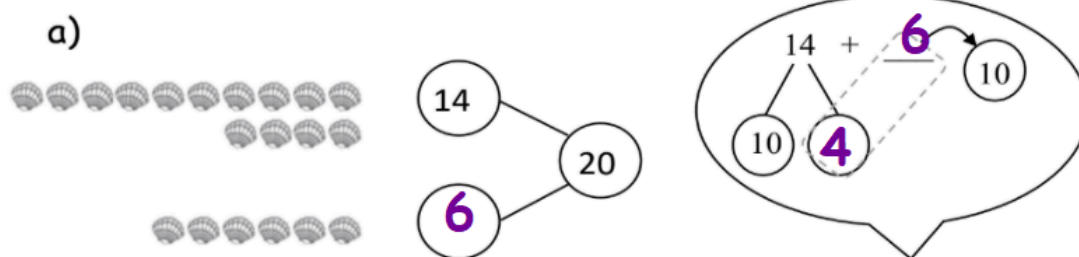
Date: _____

1. How many circles are there **altogether**?

Show using a number sentence and a number bond.



4. Write the missing numbers.



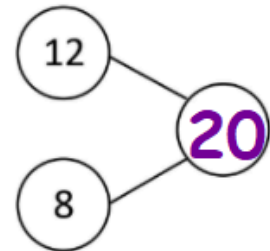
5. a) Jessica has 12 sunflowers.

She buys 8 **more** sunflowers.

How many sunflowers does Jessica have in all?



$$\underline{12} + \underline{8} = \underline{20}$$



Jessica has 20 sunflowers in all.

6. a) A chef has 11 carrots.

He bought another 9 carrots.

How many carrots does the chef have **in all**?



$$\underline{11} + \underline{9} = \underline{20}$$

The chef has 20 carrots in all.

