
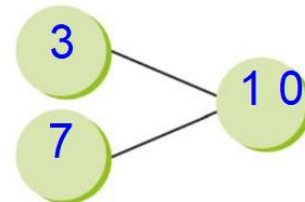


Look Back

P.52



How many fruits are there altogether?
Use the number bond to help you.

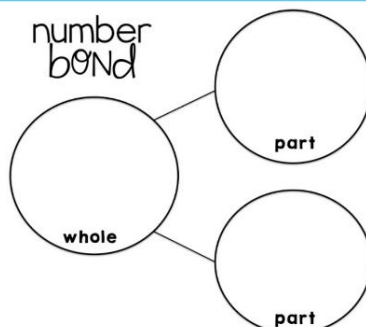


P.52

Thinking Cap



There are 20 fruits on another table.
How many of each type of fruit do you think
is on that table?
Discuss with your partner.



Type 1	Type 2
1	19
2	18
3	17
4	16
5	15
6	14
7	13
8	12
9	11
10	10
11	9
12	8
13	7
14	6
15	5
16	4
17	3
18	2
19	1

Let's Learn

Yi Xin pasted some stickers on Card A and Card B.

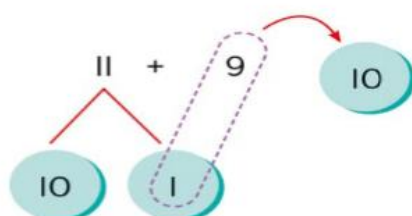


Card A



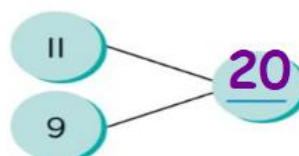
Card B

- a How many stickers are there altogether?



11 is 10 and 1.
You regroup 1 and 9 to make 10.

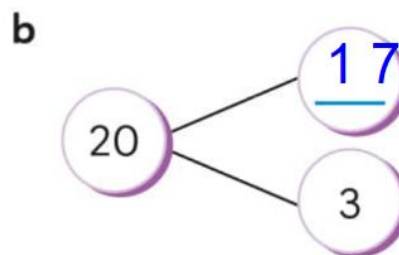
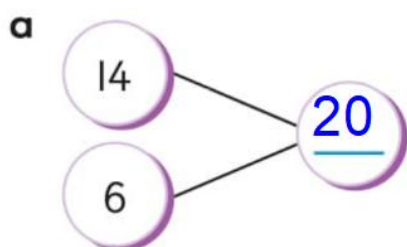
11 + 9 is the same as 10 + 10.
11 and 9 **make 20**.



There are 20 stickers altogether.

Let's Practise

- I Complete the number bonds.



2



How many mangoes are there altogether?

Show a number sentence and number bond. $12 + 8 = 20$

$$19 + 1 = 20$$

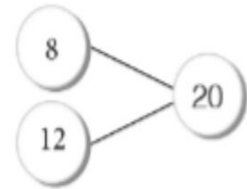
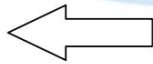
$$17 + 3 = 20$$

$$16 + 4 = 20$$

$$15 + 5 = 20$$



What other pairs of numbers make 20?



3 There are 20 children in a school library.

How many boys and how many girls could there be?

Show your answers using number bonds.

