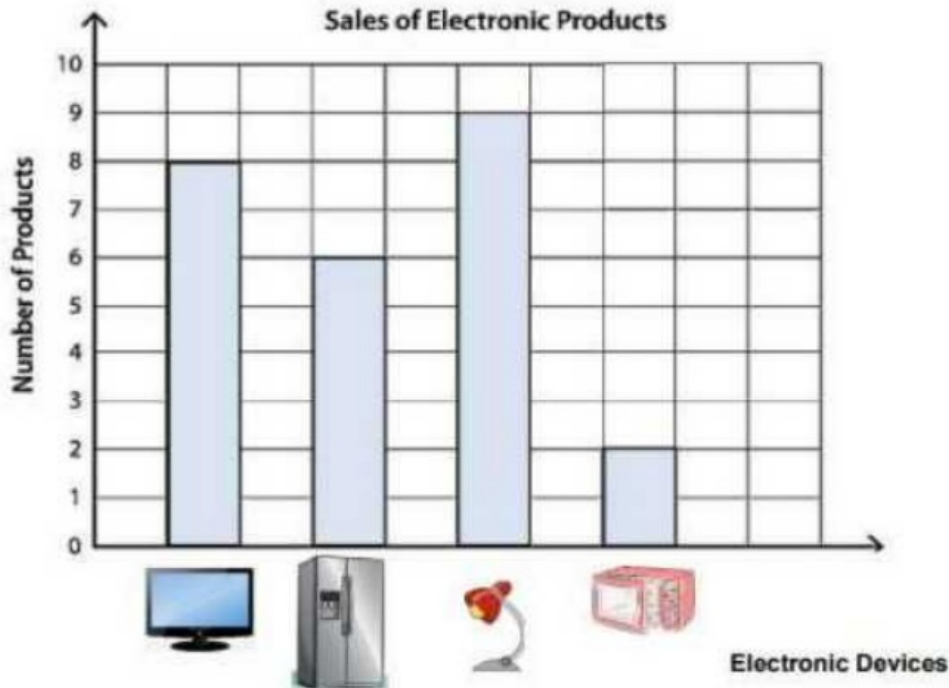


Date: _____

Chapter 16 Lesson E: Draw Conclusions from Data (16.E.1)

Q1. A store records the number of devices sold in a week.

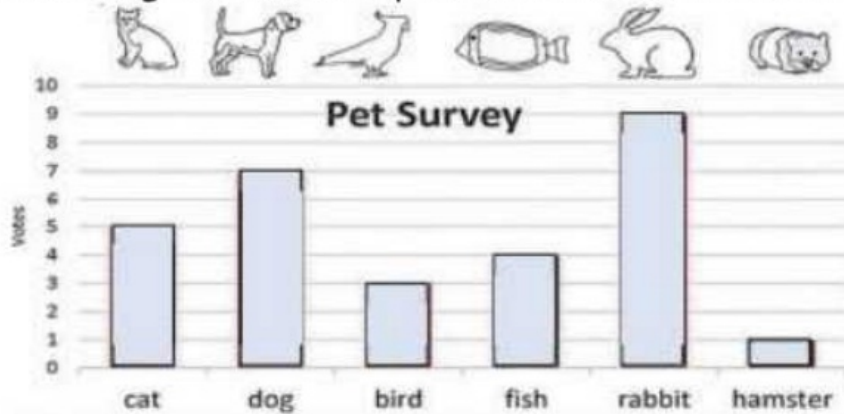


According to the bar chart above, answer the following questions.

- a) How many televisions were sold? _____
- b) How many televisions and refrigerators were sold altogether? _____
- c) Which was the most popular product in the store? _____
- d) Which electronic product was sold the least? _____
- e) How many more televisions than microwave ovens were sold? _____
- f) How many devices were sold altogether? _____

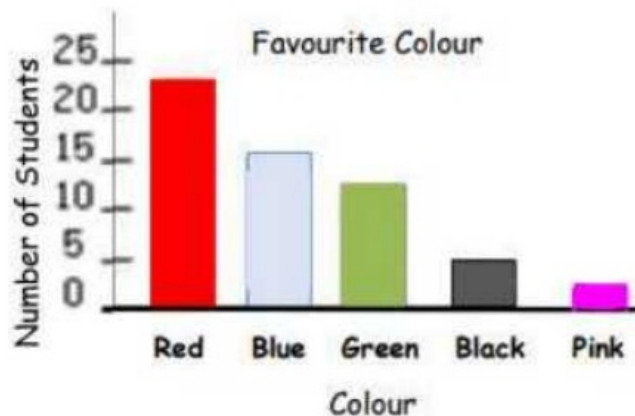
Q2. John asked his classmates what their favourite pets were.

The following bar chart represents the data he collected.



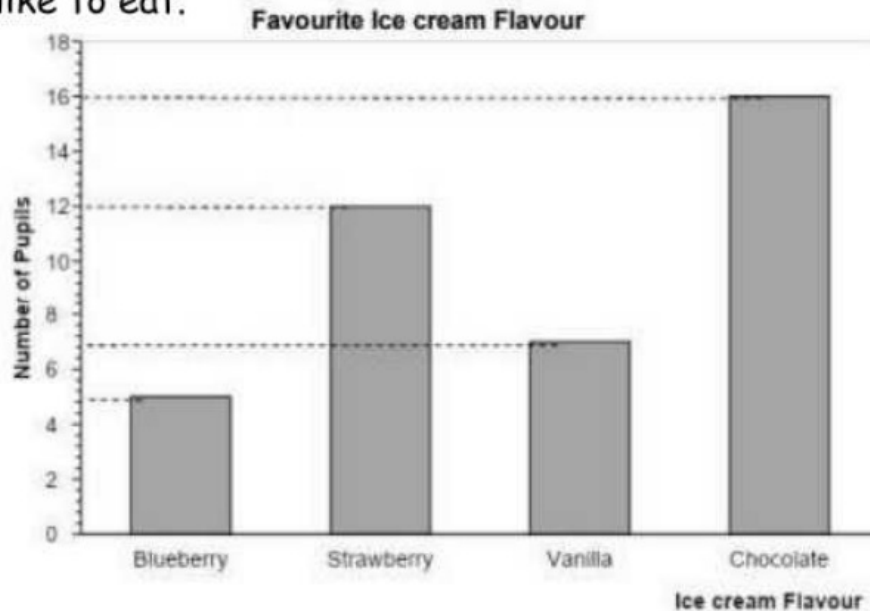
- a) Which pet got the most votes? _____
- b) How many votes did the dog get? _____
- c) How many votes did the fish get? _____
- d) How many more votes did the rabbit get than the fish? _____

Q3. Students in grade 3 were asked about their favourite colour.



- a) Estimate the number of students who picked red? _____
- b) Estimate the number of students who picked pink? _____

Q4. The bar chart shows the flavours of ice cream that the pupils of grade 3 like to eat.



- a) The least popular flavour is_____.
- b) 12 pupils chose_____as their favourite ice-cream flavour.
- c) _____pupils chose vanilla as their favourite ice-cream flavour.
- d) Correct the statements.
- 8 pupils like vanilla ice cream. _____
 - The most popular ice cream flavour is strawberry.
