


## Chapter 5 :2D Shapes

**Objective:** Identify 2D and 3D shapes.

Recognize and name the properties of polygons.

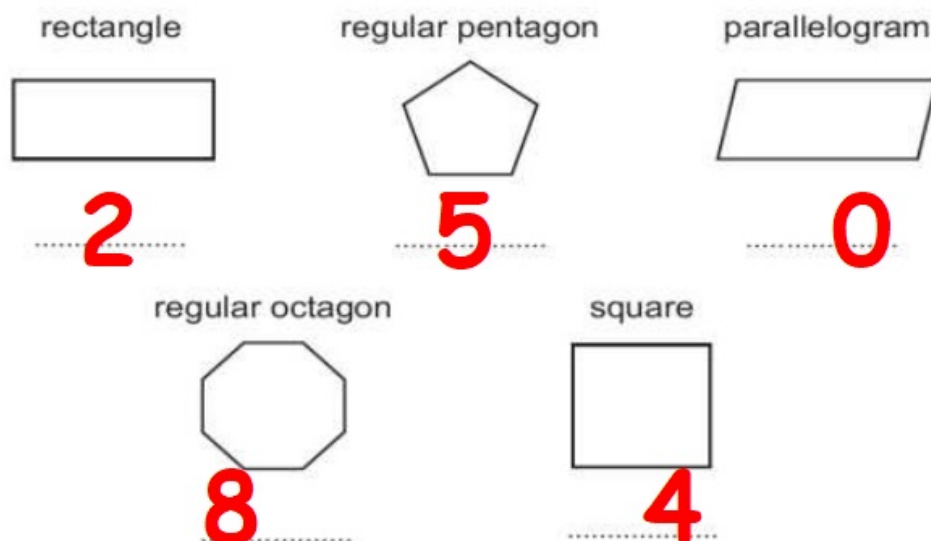
Differ between regular pentagons and irregular pentagons.

Q1) Here are three 2D shapes.



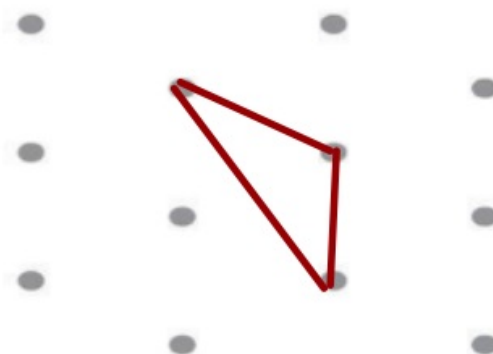
Write the number of lines of symmetry for each shape on the answer lines.

Q2) Here are five shapes.



Write the number of lines of symmetry for **each** shape on the answer lines.

Q5) Here is a 1 cm dotted grid.



Join dots to make a triangle with only **one** line of symmetry.