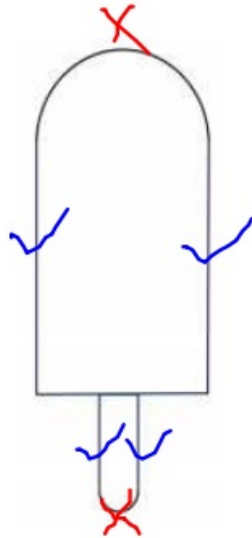


## Chapter 5: Extra Practice

1. Karina drew an ice cream as shown.



(a) Identify the name of the shapes used.

**semicircles rectangles**

Karina used two \_\_\_\_\_ and two \_\_\_\_\_  
in her drawing.

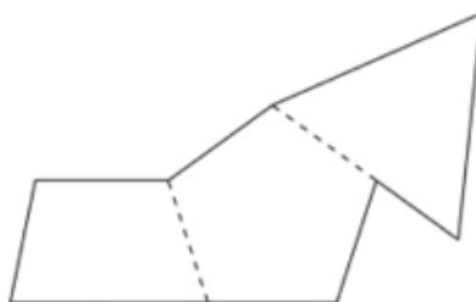
(b) Karina says that there are five straight lines and  
two curved edges.

Do you agree with her? **yes, I agree**

Make a tick on each straight line and a cross on each  
curved edge.

2. Draw lines to show the shapes that make up each figure.  
Then, write the names of the shapes.

(a)

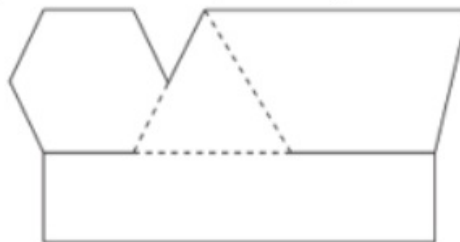



Trapezium, pentagon and triangle

**there is more than one answer**

Names of the shapes: \_\_\_\_\_

(b)



Hexagon, triangle, trapezium and rectangle

**there is more than one answer**

Names of the shapes: \_\_\_\_\_