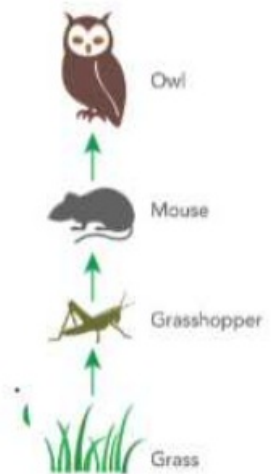


Date: _____

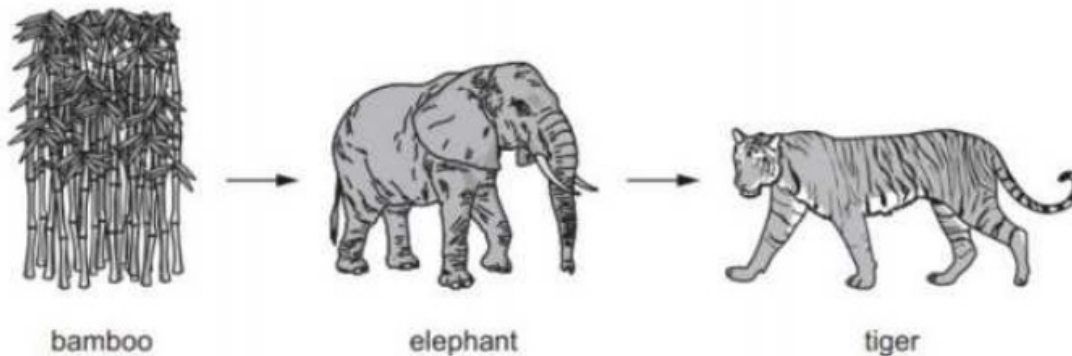
Chapter 3, Practice Worksheet (1)

1. Observe this food chain. Circle the correct answer.

- The arrows in the food chain show:
 - a. The movement of the prey.
 - b. The flow of energy in the form of food.



2. The elephant is a consumer in this food chain.



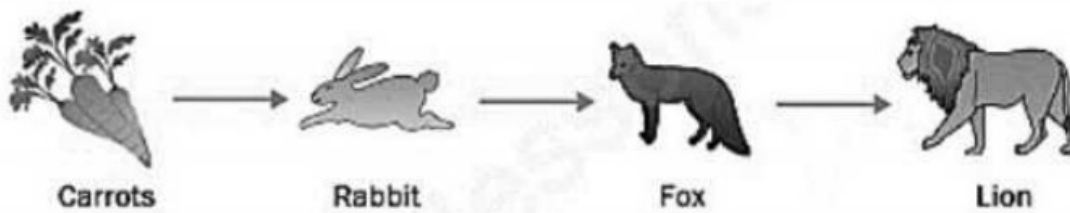
a. What is a **consumer**?

_____.

b. In this food chain the **producer** is the _____.

c. The tiger and elephant are both consumers in this food chain, how are they **different**?

3 Maya is learning about food chains.



• Complete the sentences about this food chain.

- The predator is the _____ or the _____.
- The prey is the _____ or the _____.

4 The animals were sorted depending on what they eat.

- In one word, give a title for each section of the Venn diagram.
- Place **humans** and a **banana tree** in their correct place in the Venn diagram.

