

Worksheet D

Activity Book p.60

Reflect Shapes

Level 1 Level 2 Level 3

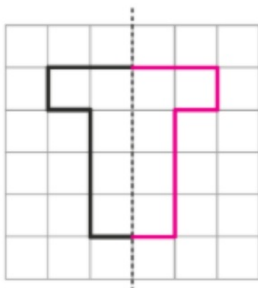
If you are not sure, you can refer to Student's Book page 79.



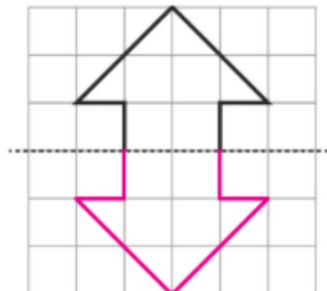
- I Reflect each shape along the dotted line on the square grid.

Draw the reflection on the square grid.

a



b



Mark out the reflected vertices and then join them.



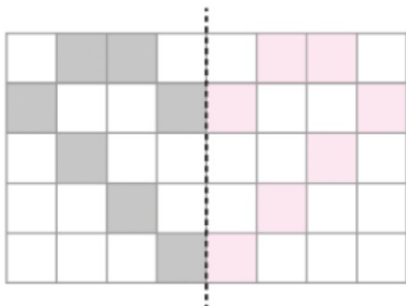
Activity Book p.60



Level 1 **Level 2** Level 3

- 2 Reflect the patterns below along the dotted line. Colour on the grid to show your answer.

a



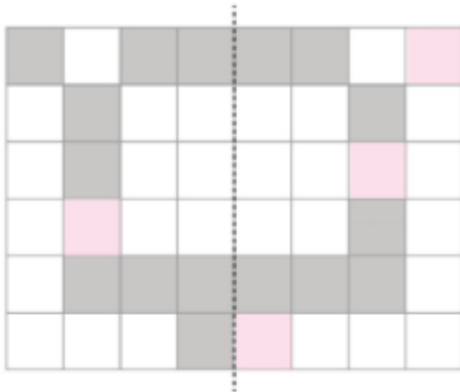
b



- 3 Amy makes a conjecture that she needs to colour 4 more squares in each of these figures. Is her conjecture correct?

Colour to show.

a



b

